

WORKSHEET FOR COMMON MATHS TEST
CLASS III
Worksheet No. 18

MATCH THE FOLLOWING--



10:00



12:00



11:30



5:30












6:45












2:30

SHOW THE TIME ON THE CLOCK.

 <> 6:30 Half past 6	 <> 9:00 9 O' clock	 <> 10:00 10 O' clock
 <> 4:45 Quarter to 5	 <> 8:00 8 O' clock	 <> 7:30 Half past 7
 <> 2:30 Half past 2	 <> 1:00 1 O' clock	 <> 5:30 Half past 5

WRITE THE TIME .

 <p>Half past <u> </u></p>	 <p>Half past <u> </u></p>	 <p>Quarter past <u> </u></p>
 <p>Quarter to <u> </u></p>	 <p><u> </u> O' clock</p>	 <p>Half past <u> </u></p>
 <p>Quarter past <u> </u></p>	 <p>Quarter past <u> </u></p>	 <p><u> </u> O' clock</p>

FILL IN THE BLANKS –

- 1) A clock has _____ numbers .
- 2) The short hand on the clock is the _____ hand .
- 3) The _____ hand on the clock is the _____ hand .
- 4) The hour hand completes _____ rounds in 1 day .
- 5) The minute hand completes _____ rounds in 1 day .
- 6) One day = _____ hours .
- 7) One _____ = 60 minutes .
- 8) One minute = 60 _____ .
- 9) 4 O' clock can also be written as _____ .

MATCH THE FOLLOWING –

1 decade
1 millennium
1 day
1 year
1 century
1 week

12 months
7 days
24 hours
365/366 days
52 weeks
10 years
100 years
1000 years

MONEY

Q-1 How much does each cost –

a)



+



=

b)



+



=

c)



+



+



=

d)



$$\begin{array}{c}
 \text{₹100} + \text{₹100} + \text{₹50} = \underline{\hspace{2cm}}
 \end{array}$$

e)



$$\begin{array}{c}
 \text{₹50} + \text{₹50} + \text{₹100} + \text{₹100} = \underline{\hspace{2cm}}
 \end{array}$$

f)



$$\begin{array}{c}
 \text{₹500} + \text{₹20} + \text{₹10} + \text{₹1} = \underline{\hspace{2cm}}
 \end{array}$$

Q- Write in short form –

- a) 5 rupees 60 paise = _____
- b) 1 rupee 78 paise = _____
- c) 20 rupees 50 paise = _____
- d) 13 rupees 90 paise = _____
- e) 8 rupees 25 paise = _____
- f) 19 rupees 10 paise = _____
- g) 6 rupees 13 paise = _____
- h) 86 rupees 65 paise = _____
- i) 19 rupees 27 paise = _____
- j) 2 rupees 12 paise = _____
- k) 7 rupees 23 paise = _____

Q- Add together –

a)



b)



c)



d)



e)



Q- Convert rupees into paise-

Rs 2= _____paise

Rs 5= _____paise

Rs19= _____paise

Rs 67= _____paise

Rs 16.90= _____paise

Rs 8.52= _____paise

Rs 14.50= _____paise

Rs 96.70= _____paise

Rs 32 = _____paise

Rs 100.00= _____paise

Rs 15 = _____paise

Rs 7.20 = _____paise

Rs 15.80 = _____paise

Rs 4.25 = _____paise

Q- Convert paise into rupees-

385 paise = Rs _____

1423 paise = Rs _____

4163 paise = Rs _____

3000 paise = Rs _____

600 paise = Rs _____

4163 paise = Rs _____

3180 paise = Rs _____

2780 paise = Rs _____

1010 paise = Rs _____

2260 paise = Rs _____

Q- Sheetal has Rs 100 in her purse. She spent Rs 87 .
How much money is left in her purse now ?

Q- Mother gave Rs 65.50 to Mohan. Father also gave
to Mohan Rs 25.75 .How much money does Mohan have
now?

Q- How much more is Rs 60.40 than Rs 25.75?