

Algebraic Expressions

Chapter 12

12.1 Introduction

We have already come across simple algebraic expressions like $x + 3$, $y - 5$, $4x + 5$ and so on. In Class VI, we have seen how these expressions are useful in formulating puzzles and problems. We have also seen examples of several expressions in the chapter on simple equations.

Expressions are a central concept in algebra. This Chapter is devoted to algebraic expressions. When you have studied this Chapter, you will know how algebraic expressions are formed, how they can be combined, how we can find their values and how they can be used.

12.2 How Are Expressions Formed

We now know very well what a variable is. We use letters x , y , l , m , ... etc. to denote variables. A variable can take various values. Its value is not fixed. On the other hand, a constant has a fixed value. Examples of constants are: 4, 100, -17 , etc.

We combine variables and constants to make algebraic expressions. For this, we use the operations of addition, subtraction, multiplication and division. We have already come across expressions like $4x + 5$, $10y - 20$. The expression $4x + 5$ is obtained from the variable x , first by multiplying x by the constant 4 and then adding the constant 5 to the product. Similarly, $10y - 20$ is obtained by first multiplying y by 10 and then subtracting 20 from the product. The above expressions were obtained by combining variables with constants. We can also obtain expressions by combining variables with themselves or with other variables. Look at how the following expressions are obtained:

$$x^2, 2y^2, 3x^2 - 5, xy, 4xy + 7$$

(i) The expression x^2 is obtained by multiplying the variable x by itself;

$$x \times x = x^2$$

Just as 4×4 is written as 42, we write $x \times x = x^2$. It is commonly read as x squared.

(Later, when you study the chapter ‘Exponents and Powers’ you will realise that x^2 may also be read as x raised to the power 2).

In the same manner, we can write $x \times x \times x^2$

Commonly, x^3 is read as ‘ x cubed’. Later, you will realise that x^3 may also be read as x raised to the power 3.

x, x^2, x^3, \dots are all algebraic expressions obtained from x .

(ii) The expression $2y^2$ is obtained from y : $2y^2 = 2 \times y \times y$
Here by multiplying y with y we obtain y^2 and then we multiply y^2 by the constant 2.

(iii) In $(3x^2 - 5)$ we first obtain x^2 , and multiply it by 3 to get $3x^2$.
From $3x^2$, we subtract 5 to finally arrive at $3x^2 - 5$.

(iv) In xy , we multiply the variable x with another variable y . Thus,
 $x \times y \times y$.

(v) In $4xy + 7$, we first obtain xy , multiply it by 4 to get $4xy$ and add 7 to $4xy$ to get the expression.

12.3 Terms Of An Expression

We shall now put in a systematic form what we have learnt above about how expressions are formed. For this purpose, we need to understand what terms of an expression and their **factors** are.

Consider the expression $(4x + 5)$. In forming this expression, we first formed $4x$ separately as a product of 4 and x and then added 5 to it. Similarly consider the expression $(3x^2 + 7y)$. Here we first formed $3x^2$ separately as a product of 3, x and x . We then formed $7y$ separately as a product of 7 and y . Having formed $3x^2$ and $7y$ separately, we added them to get the expression.

You will find that the expressions we deal with can always be seen this way. They have parts which are formed separately and then added. Such parts of an expression which are formed separately first and then added are known as terms. Look at the expression $(4x^2 - 3xy)$. We say that it has two terms, $4x^2$ and $-3xy$. The term $4x^2$ is a product of 4, x and x , and the term $(-3xy)$ is a product of (-3) , x and y .

Terms are added to form expressions. Just as the terms $4x$ and 5 are added to form the expression $(4x + 5)$, the terms $4x^2$ and $(-3y)$ are added to give the expression $(4x^2 - 3xy)$. This is because $4x^2 + (-3xy) = 4x^2 - 3xy$.

Note, the minus sign $(-)$ is included in the term. In the expression $4x^2 - 3xy$, we took the term as $(-3xy)$ and not as $(3xy)$. That is why we do not need to say that terms ‘are added or subtracted’ to form an expression; just ‘added’ is enough.

Factors of a term

We saw above that expression $(4x^2 - 3xy)$ consists of two terms $4x^2$ and $-3xy$. The term $4x^2$ is a product of 4, x and x are the factors of the term $4x^2$. A term is a product of its factors. The term $-3xy$ is a product of the factors -3 , x and y .

We can represent the terms and factors of the terms of an expression conveniently and elegantly by a tree diagram. The tree for the expression $(4x^2 - 3xy)$ is as shown in the adjacent figure.

Note, in the tree diagram, we have used dotted lines for factors and continuous lines for terms. This is to avoid mixing them.

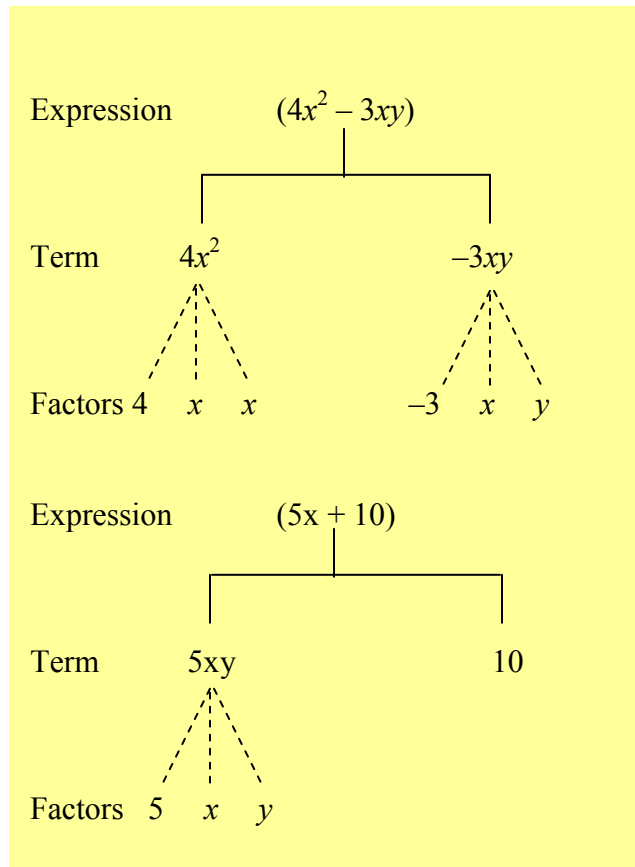
Let us draw a tree diagram for the expression $5xy + 10$.

The factors are such that they cannot be further factorised. Thus we do not write $5xy$ as $5 \times xy$, because xy can be further factorised.

Similarly, if x^3 were a term, it would be written as $x \times x \times x$ and not $x^2 \times x$. Also, remember that 1 is not taken as a separate factor.

Coefficients

We have learnt how to write a term as a product of factors. One of these factors may be numerical and the others algebraic (i.e., they contain variables). The numerical factor is said to be the numerical coefficient or simply the **coefficient** of the term. It is also said to be the coefficient of the rest of the term (which is obviously the product of algebraic factors of the term). Thus in $5xy$, 5 is the coefficient of the term. It is also the coefficient of xy . In the term $10xyz$, 10 is the coefficient of xyz , in the term $-7x^2y^2$, -7 is the coefficient of x^2y^2 .



TRY THESE

1. What are the terms in the following expressions? Show how the terms are formed.

Draw a tree diagram:
 $8y + 3x^2$, $7mn - 4$, $2x^2y$.

2. Write three expressions each having 4 terms.

When the coefficient of a term is + 1, it is usually omitted. For example, $1x$ is written as x ; $1x^2y^2$ is written as x^2y^2 and so on. Also, the coefficient (-1) is indicated only by the minus sign. Thus $(-1)x$ is written as $-x$; $(-1)x^2y^2$ is written as $-x^2y^2$ and so on.

Sometimes, the word ‘coefficient’ is used in a more general way. Thus we say that in the term $5xy$, 5 is the coefficient of xy , x is the coefficient of $5y$ and y is the coefficient of $5x$. In $10xy^2$, 10 is the coefficient of xy^2 , x is the coefficient of $10y^2$ and y^2 is the coefficient of $10x$. Thus, in this more general way, a coefficient may be either a numerical factor or an algebraic factor or a product of two or more factors. It is said to be the coefficient of the product of the remaining factors.

Example 1

Identify, in the following expressions, terms which are not constant. Give their numerical coefficients:

$$xy + 4, 13 - y^2, 13 - y + 5y^2, 4p^2q - 3pq^2 + 5$$

Solution

S.No.	Expression	Term (which is not a constant)	Numerical Coefficient
(i)	$xy + 4$	xy	1
(ii)	$13 - y^2$	$-y^2$	-1
(iii)	$13 - y + 5y^2$	$-y$ $5y^2$	-1 5
(iv)	$4p^2q - 3pq^2 + 5$	$4p^2q$ $-3pq^2$	4 -3

Example 2

(a) What are the coefficients of x in the following expressions?

$$4x - 3y, 8 - x + y, y^2x - y, 2z - 5xz$$

(b) What are the coefficients of y in the following expressions?

$$4x - 3y, 8 + yz, yz^2 + 5, my + m$$

Solution

(a) In each expression we look for a term with x as a factor. The remaining part of that term is the coefficient of x .

S.No.	Expression	Term with Factor x	Coefficient of x
(i)	$4x - 3y$	$4x$	4
(ii)	$8 - x + y$	$-x$	-1
(iii)	$y^2x - y$	y^2x	y^2
(iv)	$2z - 5xz$	$-5xz$	$-5z$

(b) The method is similar to that in (a) above.

S.No.	Expression	Term with Factor y	Coefficient of y
(i)	$4x - 3y$	$-3y$	-3
(ii)	$8 + yz$	yz	z
(iii)	$yz^2 + 5$	yz^2	z^2
(iv)	$my + m$	my	m

12.4 Like And Unlike Terms

When terms have the same algebraic factors, they are **like** terms. When terms have different algebraic factors, they are **unlike** terms. For example, in the expression $2xy - 3x + 5xy - 4$, look at the terms $2xy$ and $5xy$. The factors of $2xy$ are 2, x and y . The factors of $5xy$ are 5, x and y . Thus their algebraic (i.e., those which contain variables) factors are the same and hence they are **like** terms. On the other hand the terms $2xy$ and $-3x$, have different algebraic factors. They are **unlike** terms. Similarly, the terms, $2xy$ and 4, are unlike terms. Also, the terms $-3x$ and 4 are unlike terms.

12.5 Monomials, Binomials, Trinomials And Polynomials

An expression with only one term is called a **monomial**; for example, $7xy$, $-5m$, $3z^2$, 4 etc.

An expression which contains two unlike terms is called a **binomial**; for example, $x + y$, $m - 5$, $mn + 4m$, $a^2 - b$ are binomials. The expression $10pq$ is not a binomial; it is a monomial. The expression $(a + b + 5)$ is not a binomial. It contains three terms.

An expression which contains three terms is called a **trinomial**; for example, the expressions $x + y + 7$, $ab + a + b$, $3x^2 - 5x + 2$, $m + n + 10$ are trinomials. The expression $ab + a + b + 5$ is, however not a trinomial; it contains four terms and not three. The expression $x + y + 5x$ is not a trinomial as the terms x and $5x$ are like terms.

In general, an expression with one or more terms is called a **polynomial**. Thus a monomial, a binomial and a trinomial are all polynomials.

Example 3

State with reasons, which of the following pairs of terms are of like terms and which are of unlike terms:

(i) $7x$, $12y$
(v) $6xy^2$, $9x^2y$

(ii) $15x$, $-2lx$
(vi) pq^2 , $-4pq^2$

(iii) $-4ab$, $7ba$
(vii) mn^2 , $10mn$

(iv) $3xy$, $3x$

Solution

S.No.	Pair	Factors	Algebraic factors same or different	Like/ Unlike terms	Remarks
(i)	$7x$ $12y$	$\left. \begin{matrix} 7, x \\ 12, y \end{matrix} \right\}$	Different	Unlike	The variables in the terms are different.
(ii)	$15x$ $-21x$	$\left. \begin{matrix} 15, x \\ -21, x \end{matrix} \right\}$	Same	Like	
(iii)	$-4ab$ $7ba$	$\left. \begin{matrix} -4, a, b \\ 7, a, b \end{matrix} \right\}$	Same	Like	Remember $ab = ba$
(iv)	$3xy$ $3x$	$\left. \begin{matrix} 3, x, y \\ 3, x \end{matrix} \right\}$	Different	Unlike	The variable y is only in one term
(v)	$6xy$ $9x^2y$	$\left. \begin{matrix} 6, x, y, y \\ 9, x, x, y \end{matrix} \right\}$	Different	Unlike	The variable in the two terms match, but their powers do not match
(vi)	pq^2 $-4pq^2$	$\left. \begin{matrix} 1, p, q, q \\ -4, p, q, q \end{matrix} \right\}$	Same	Like	Note, numerical factor 1 is not shown

Following simple steps will help you to decide whether the given terms are like or unlike terms:

- (i) Ignore the numerical coefficients. Concentrate on the algebraic part of the terms.
- (ii) Check the variables in the terms. They must be the same.
- (iii) Next, check the powers of each variable in the terms. They must be the same.

Note that in deciding like terms, two things do not matter (1) the numerical coefficients of the terms and (2) the order in which the variables are multiplied in the terms.

Exercise 12.1

1. Get the algebraic expressions in the following cases using variables, constants and arithmetic operations.

- (i) Subtraction of z from y .
- (ii) One-half of the sum of numbers x and y .
- (iii) The number z multiplied by itself.
- (iv) One-fourth of the product of numbers p and q .
- (v) Numbers x and y both squared and added.
- (vi) Number 5 added to three times the product of number m and n .
- (vii) Product of numbers y and z subtracted from 10.
- (viii) Sum of numbers a and b subtracted from their product.
- (ix) Divide the sum of number $x + y$ by z .
- (x) Subtract product of numbers $p + q$ from their sum

2. (i) Identify the terms and their factors in the following expressions

Show the terms and factors by tree diagrams.

- (a) $x - 3$ (b) $1 + x + x^2$ (c) $y - y^3$
(d) $5x^2 + 7x^2y$ (e) $-ab + 2b^2 - 3a^2$

(ii) Identify terms and factors in the expressions given below:

- (a) $-4x + 5$ (b) $-4x + 5y$ (c) $5y + 3y^2$
(d) $xy + 2x^2y^2$ (e) $pq + q$ (f) $1.2ab - 2.4b + 3.6a$
(g) $\frac{3}{4}x + \frac{1}{4}$ (h) $0.1p^2 + 0.2q^2$

3. Identify the numerical coefficients of terms (other than constants) in the following expressions:

- (i) $5 - 3t^2$ (ii) $1 + t + t^2 + t^3$ (iii) $x + 2xy + 3y$
(iv) $100m + 1000n$ (v) $-p^2q^2 + 7pq$ (vi) $1.2a + 0.8b$
(vii) $3.14r^2$ (viii) $2(l + b)$ (ix) $0.1y + 0.01y^2$

(b) Identify terms which contain y^2 and give the coefficient of y^2 .

(i) $8 - xy^2$ (ii) $5y^2 + 7x$ (iii) $2x^2y - 15xy^2 + 7y^2$

5. Classify into monomials, binomials and trinomials.

(i) $4y - 7z$ (ii) y^2 (iii) $x + y - xy$ (iv) 100
(v) $ab - a - b$ (vi) $5 - 3t$ (vii) $4p^2q - 4pq^2$ (viii) $7mn$
(ix) $z^2 - 3z + 8$ (x) $a^2 + b^2$ (xi) $z^2 + z$
(xii) $1 + x + x^2$ (xiii) $3 - 4x + 7xy^2$ (xiv) $\frac{5}{7}$ (xv) $-50x^7$

6. State whether a given pair of terms is of like or unlike terms.

(i) $1, 100$ (ii) $-7x, \frac{5}{2}x$ (iii) $-29x, -29y$
(iv) $14xy, 42yx$ (v) $4m^2p, 4mp^2$ (vi) $12xz, 12x^2z^2$
(vii) $5xy, -4xy$ (viii) $\frac{3}{7}xy^2, \frac{7}{3}x^2y$ (ix) $3x, 7y$ (x) $-4x, -19x$

7. Identify like terms in the following:

(a) $-xy^2, -4yx^2, 8x^2, 2xy^2, 7y, -11x^2, -100x, -11yx, 20x^2y, -6x^2, y, 2xy, 3x$

(b) $10pq, 7p, 8q, -p^2q^2, -7qp, -100q, -23, 12q^2p^2, -5p^2, 41, 2405p, 78qp, 13p^2q, qp^2, 701p^2$

12.6 Addition And Subtraction of Algebraic Expressions

Consider the following problems:

1. Saika has some marbles. Ambreen has 10 more. Babloo says that he has 3 more marbles than the number of marbles Saika and Ambreen together have. How do you get the number of marbles that Babloo has?

Since it is not given how many marbles Saika has, we shall take it to be x . Ambreen then has 10 more, i.e., $x + 10$. Babloo says that he has 3 more marbles than what Saika and Ambreen have together. So we take the sum of the numbers of Saika's marbles and Ambreen's marbles, and to this sum add 3, that is we take the sum of x , $x + 10$ and 3

2. Aslam's father's present age is 3 times Aslam's age. Aslam's grandfather's age is 13 years more than the sum of Aslam's age and Aslam's father's age. How do you find Aslam's grandfather's age?

Since Aslam's age is not given, let us take it to be y years. Then his father's age is $3y$ years. To find Aslam's grandfather's age we have to take the sum of Aslam's age (y) and his father's age ($3y$) and to the sum add 13, that is, we have to take the sum of y , $3y$ and 13.

3. In a garden, roses and marigolds are planted in square plots. The length of the square plot in which marigolds are planted is 3 metres greater than the length of the square plot in which roses are planted. How much bigger in area is the marigold plot than the rose plot?

Let us take l metres to be length of the side of the rose plot. The length of the side of the marigold plot will be $(l + 3)$ metres. Their respective areas will be l^2 and $(l + 3)^2$. The difference between $(l^2 + 3)^2$ and l^2 will decide how much bigger in area the marigold plot is.

In all the three situations, we had to carry out addition or subtraction of algebraic expressions. There are a number of real life problems in which we need to use expressions

and do arithmetic operations on them. In this section, we shall see how algebraic expressions are added and subtracted.

TRY THESE

Think of atleast two situations in each of which of which you need to form two algebraic expressions and add or subtract them.

Adding and subtracting like terms

The simplest expressions are monomials. They consist of only one term. To begin with we shall learn how to add or subtract like terms.

Let us add $3x$ and $4x$. We know x is a number and so also are $3x$ and $4x$.

$$\begin{aligned}\diamond \quad \text{Now, } 3x + 4x &= (3 \times x) + (4 \times x) \\ &= (3 + 4) \times x \text{ (using distributive law)} \\ &= 7 \times x = 7x\end{aligned}$$

or $3x + 4x = 7x$

Since variables are numbers, we can use distributive law for them.

$$\begin{aligned}\diamond \quad \text{Let us next add } 8xy, 4xy \text{ and } 2xy \\ 8xy + 4xy + 2xy &= (8 \times xy) + (4 \times xy) + (2 \times xy) \\ &= (8 + 4 + 2) \times xy \\ &= 14 \times xy = 14xy\end{aligned}$$

or $8xy + 4xy + 2xy = 14xy$

$$\begin{aligned}\diamond \quad \text{Let us subtract } 4n \text{ from } 7n \\ 7n - 4n &= (7 \times n) - (4 \times n) \\ &= (7 - 4) \times n = 3 \times n = 3n\end{aligned}$$

or $7n - 4n = 3n$

$$\begin{aligned}\diamond \quad \text{In the same way, subtract } 5ab \text{ from } 11ab. \\ 11ab - 5ab &= (11 - 5)ab = 6ab\end{aligned}$$

Thus, the sum of two or more like terms is a like term with a numerical coefficient equal to the sum of the numerical coefficients of all the like terms.

Similarly, the difference between two like terms with a numerical coefficient equal to the difference between the numerical coefficients of the two like terms.

Note, unlike terms cannot be added or subtracted the way like terms are added or subtracted. We have already seen examples of this, when 5 is added to x , we write the result as $(x + 5)$. Observe that in $(x + 5)$ both the terms 5 and x are retained.

Similarly, if we add the unlike terms $3xy$ and 7, the sum is $3xy + 7$.

If we subtract 7 from $3xy$, the result is $3xy - 7$.

Adding and subtracting general algebraic expressions

Let us take some examples:

- ❖ Add $3x + 11$ and $7x - 5$

$$\text{The sum} = 3x + 11 + 7x - 5$$

Now, we know that the terms $3x$ and $7x$ are like terms and so also are 11 and -5 .

Further $3x + 7x = 10x$ and $11 + (-5) = 6$. We can, therefore, simplify the sum as:

$$\text{The sum} = 3x + 11 + 7x - 5$$

$$= 3x + 7x + 11 - 5 \quad (\text{rearranging terms})$$

$$= 10x + 6$$

$$\text{Hence, } 3x + 11 + 7x - 5 = 10x + 6$$

- ❖ Add, $3x + 11 + 8z + 7x - 5$.

$$\text{The sum} = 3x + 11 + 8z + 7x - 5$$

$$= 3x + 7x + 11 - 5 + 8z \quad (\text{rearranging terms})$$

Note we have put like terms together; the single unlike term $8z$ will remain as it is.

$$\text{Therefore, the sum} = 10x + 6 + 8z$$

- ❖ Subtract $a - b$ from $3a - b + 4$

$$\text{The difference} = 3a - b + 4 - (a - b)$$

$$= 3a - b + 4 - a + b$$

Observe how we took $(a - b)$ in the brackets and took care of signs in opening bracket. Rearranging the terms to put like terms together,

$$\text{The difference} = 3a - a + b - b + 4$$

Note, just as

$$-(5 - 3) = -5 + 3.$$

$$-(a - b) = -a + b.$$

The signs of algebraic terms are handled in the same way as signs of numbers.

$$= (3 - 1) a + (1 - 1) b + 4$$

$$\text{The difference} = 2a + (0) b + 4 = 2a + 4$$

$$\text{or } 3a - b + 4 - (a - b) = 2a + 4$$

We shall now solve some more examples on addition and subtraction of expression for practice.

Example 4

Collect like terms and simplify the expression:

$$12m^2 - 9m + 5m - 4m^2 - 7m + 10$$

Solution

Rearranging terms, we have

$$\begin{aligned} 12m^2 - 4m^2 + 5m - 9m - 7m + 10 \\ &= (12 - 4) m^2 + (5 - 9 - 7) m + 10 \\ &= 8m^2 + (-4 - 7) m + 10 \\ &= 8m^2 + (-11) m + 10 \\ &= 8m^2 - 11m + 10 \end{aligned}$$

Example 5

Subtract $24ab - 10b - 18a$ from $30ab + 12b + 14a$.

Solution

$$\begin{aligned} 30ab + 12b + 14a - (24ab - 10b - 18a) \\ &= 30ab + 12b + 14a - 24ab + 10b + 18a \\ &= 30ab - 24ab + 12b + 10b + 14a + 18a \\ &= 6ab + 22b + 32a \end{aligned}$$

Alternatively, we write the expression one below the other with the like terms appearing exactly below like terms as:

$$\begin{array}{r} 30ab + 12b + 14a \\ 24ab - 10b - 18a \\ - \quad \quad \quad + \quad + \\ \hline 6ab + 22b + 32a \\ \hline \end{array}$$

Note, subtracting a term is the same as adding its inverse. Subtracting $-10b$ is the same as adding $+10b$; Subtracting $-18a$ is the same as adding $18a$ and subtracting $24ab$ is the same as $-24ab$. The signs shown below the expression to be subtracting are a help in carrying out the subtraction properly.

Example 6

From the sum $2y^2 + 3yz$, $-y^2 - yz - z^2$ and $yz + 2z^2$, subtract the sum $3y^2 - z^2$ and $-y^2 + yz + z^2$.

Solution

We first add $2y^2 + 3yz$, $-y^2 - yz - z^2$ and $yz + 2z^2$.

$$\begin{array}{r} 2y^2 + 3yz \\ -y^2 - yz - z^2 \\ + yz + 2z^2 \\ \hline y^2 + 3yz + z^2 \end{array} \quad (1)$$

We then add $3y^2 - z^2$ and $-y^2 + yz + z^2$

$$\begin{array}{r} 3y^2 \quad \quad - z^2 \\ -y^2 + yz + z^2 \\ \hline 2y^2 + yz \end{array} \quad (2)$$

Now we subtract (2) from (1)

$$\begin{array}{r} y^2 + 3yz + z^2 \\ 2y^2 + yz \\ \hline - y^2 + yz + z^2 \end{array}$$

Exercise 12.2

1. Simplify combining like terms

(i) $21b - 32 + 7b - 20b$

(ii) $-z^2 + 13z^2 - 5z + 7z^3 - 15z$

(iii) $p - (p - q) - q - (q - p)$

(iv) $3a - 2b - ab - (a - b + ab) + 3ab + b - a$

(v) $5x^2y - 5x^2 + 3yx^2 - 3y^2 + x^2 - y^2 + 8xy^2 - 3y^2$

- (vi) $(3y^2 + 5y - 4) - (8y - y^2 - 4)$
 (vii) $\left[x^2y - 4xy + 7y^2 \right] - \left[3x^2y + 4xy - 7y \right]$

2. Add:

- (i) $3mn, -5mn, 8mn, -4mn$
 (ii) $t - 8tz, 3tz - z, z - t$
 (iii) $-7mn + 5, 12mn + 2, 9mn - 8, -2mn - 3$
 (iv) $a + b - 3, b - a + 3, a - b + 3$
 (v) $14x + 10y - 12xy - 13, 18 - 7x - 10y + 8xy, 4xy$
 (vi) $5m - 7n, 3n - 4m + 2, 2m - 3mn - 5$
 (vii) $4x^2y, -3xy^2, -5xy^2, 5x^2y$
 (viii) $3p^2q^2 - 4pq + 5, -10p^2q^2, 15 + 9pq + 7p^2q^2$
 (ix) $ab - 4a, 4b - ab, 4a - 4b$
 (x) $x^2 - y^2 - 1, y^2 - 1 - x^2, 1 - x^2 - y^2$
 (xi) $4xy^2 + 5x^2y + 3, 3 - xy^2 - x^2y$

3. Subtract

- (i) $-5y^2$ from y^2
 (ii) $6xy$ from $-12xy$
 (iii) $(a - b)$ from $(a + b)$
 (iv) $a(b - 5)$ from $b(5 - a)$
 (v) $-m^2 + 5mn$ from $4m^2 - 3mn + 8$
 (vi) $-x^2 + 10x - 5$ from $3ab - 2a^2 - 2b^2$
 (vii) $5a^2 - 7ab + 5b^2$ from $3ab - 2a^2 - 2b^2$
 (viii) $4pq - 5q^2 - 3p^2$ from $5p^2 + 3q^2 - pq$
 (ix) $3p^2 + 4pq - 5q^2$ from $4pq - 5q^2 + 3p^2$

4. (a) What should be added to $x^2 + xy + y^2$ to obtain $2x^2 + 3xy$?

(b) What should be subtracted from $2a + 8b + 10$ to get $-3a + 7b + 16$?

5. What should be taken away from $3x^2 - 4y^2 + 5xy + 20$ to obtain $-x^2 - y^2 + 6xy + 20$?

6. (a) From the sum of $3x - y + 11$ and $-y - 11$, subtract $3x - y - 11$.

(b) From the sum of $4 + 3x$ and $5 - 4x + 2x^2$, subtract the sum of $3x^2 - 5x$ and $-x^2 + 2x + 5$.

7. Subtract

$3x - 4y + 7$ from the sum of terms $4x + 14xy + 8$ & $3xy - 7x + 5y$
from the sum of terms $4x + 14xy + 8$ & $3xy - 7x + 5y$

12.7 Finding The Value of an Expression

We know that the value of an algebraic expression depends on the values of the variables forming the expression. There are a number of situations in which we need to find the value of an expression, such as when we wish to check whether a particular value of a variable satisfies a given equation or not.

We find values of expressions, also, when we use formulas from geometry and from everyday mathematics. For example, the area of a square is l^2 , where l is the length of a side of the square. If $l = 5$ cm., the area is 5^2 cm² or 25 cm²; if the side is 10 cm, the area is 10^2 cm² or 100 cm² and so on. We shall see more such examples in the next section.

Example 7

Find the values of the following expressions for $x = 2$.

(i) $x + 4$

(ii) $4x - 3$

(iii) $19 - 5x^2$

(iv) $100 - 10x^3$

Solution

Putting $x = 2$

(i) In $x + 4$, we get the value of $x + 4$, i.e.,

$$x + 4 = 2 + 4 = 6$$

(ii) In $4x - 3$, we get

$$4x - 3 = (4 \times 2) - 3 = 8 - 3 = 5$$

(iii) In $19 - 5x^2$, we get

$$19 - 5x^2 = 19 - (5 \times 2^2) = 19 - (5 \times 4) = 19 - 20 = -1$$

(iv) In $100 - 10x^3$, we get

$$\begin{aligned} 100 - 10x^3 &= 100 - (10 \times 2^3) = 100 - (10 \times 8) \text{ (Note } 2^3 = 8) \\ &= 100 - 80 = 20 \end{aligned}$$

Example 8

Find the value of the following expressions when $n = -2$.

(i) $5n - 2$

(ii) $5n^2 + 5n - 2$

(iii) $n^3 + 5n^2 + 5n - 2$

Solution

(i) Putting the value $n = -2$, in $5n - 2$, we get,

$$5(-2) - 2 = -10 - 2 = -12$$

(ii) In $5n^2 + 5n - 2$, we get,

$$\text{for } n = -2, 5n - 2 = -12$$

$$\text{and } 5n^2 = 5 \times (-2)^2 = 5 \times 4 = 20 \quad [\text{as } (-2)^2 = 4]$$

(iii) Now, for $n = -2$,

$$5n^2 + 5n - 2 = 8 \text{ and}$$

$$n^3 = (-2)^3 = (-2) \times (-2) \times (-2) = -8$$

Combining,

$$n^3 + 5n^2 + 5n - 2 = -8 + 8 = 0$$

We shall now consider expressions of two variables, for example, $x + y$, xy . To work out the numerical value of an expression of two variables, we need to give the values of both variables. For example, the value of $(x + y)$, for $x = 3$ and $y = 5$, is $3 + 5 = 8$.

Example 9

Find the value of the following expressions for $a = 3$, $b = 2$.

(i) $a + b$

(ii) $7a - 4b$

(iii) $a^2 + 2ab + b^2$

(iv) $a^3 - b^3$

Solution

Substituting $a = 3$ and $b = 2$ in

(i) $a + b$, we get

$$a + b = 3 + 2 = 5$$

(ii) $7a - 4b$, we get

$$7a - 4b = 7 \times 3 - 4 \times 2 = 21 - 8 = 13.$$

(iii) $a^2 + 2ab + b^2$, we get

$$a^2 + 2ab + b^2 = 3^2 + 2 \times 3 \times 2 + 2^2 = 9 + 2 \times 6 + 4 = 9 + 12 + 4 = 25$$

(iv) $a^3 - b^3$, we get

$$a^3 - b^3 = 3^3 - 2^3 = 3 \times 3 \times 3 - 2 \times 2 \times 2 = 9 \times 3 - 4 \times 2 = 27 - 8 = 19$$

Exercise 12.3

1. If $m = 2$, find the value of:

(i) $m - 2$

(ii) $3m - 5$

(iii) $9 - 5m$

(iv) $3m^2 - 2m - 7$

(v) $\frac{5m}{2} - 4$

2. If $p = -2$, find the value of:

(i) $4p + 7$

(ii) $-3p^2 + 4p + 7$

(iii) $-2p^3 - 3p^2 + 4p + 7$

(iv) $3p^3 + 2p^2 - 15p - 2$

(v) $-2p^3 + 3p^2 + 13p - 2$

3. Find the value of the following expressions, when $x = -1$:

(i) $2x - 7$

(ii) $-x + 2$

(iii) $x^2 + 2x + 1$

(iv) $a^3 - b^3$

(v) $a^2 - ab + b^2$

4. If $a = 2$, $b = -2$, find the value of:

(i) $a^2 + b^2$

(ii) $a^2 + ab + b^2$

(iii) $a^2 - b^2$

5. When $a = 0$, $b = -1$, find the value of given expressions:

(i) $2a + 2b$

(ii) $2a^2 + b^2 + 1$

(iii) $2a^2b + 2ab^2 + ab$

(iv) $a^2 + ab + 2$

(v) $3x - 4a + 7b - 1$

6. Simplify the expressions and find the value if x is equal to 2

(i) $x + 7 + 4(x - 5)$

(ii) $3(x + 2) + 5x - 7$

(iii) $6x + 5(x - 2)$

(iv) $4(2x - 1) + 3x + 11$

7. Simplify these expressions and find their values if $x = 3$, $a = -1$, $b = -2$.

(i) $3x - 5 - x + 9$

(ii) $2 - 8x + 4x + 4$

(iii) $3a + 5 - 8a + 1$

(iv) $10 - 3b - 4 - 5b$

(v) $2a - 2b - 4 - 5 + a$

8. (i) If $z = 10$, find the value of $z^3 - 3(z - 10)$.

(ii) If $p = -10$, find the value of $p^2 - 2p - 100$

9. What should be the value of a if the value of $2x^2 + x - a$ equals to 5, when $x = 0$?
10. Simplify the expression and find its value when $a = 5$ and $b = -3$.
- $$2(a^2 + ab) + 3 - ab$$
11. Find x if $3a^2 - 7x + 5a + 2$ equals to -5 when $a = 0$.

12.8 Using Algebraic Expressions — Formulas And Rules

We have seen earlier also that formulas and rules in mathematics can be written in a concise and general form using algebraic expressions. We see below several examples.

❖ Perimeter formulas

1. The perimeter of an equilateral triangle $= 3 \times$ the length of its side. If we denote the length of the side of the equilateral triangle by l , then **the perimeter of the equilateral triangle** $= 3l$
2. Similarly, **the perimeter of a square** $= 4l$ where l = the length of the side of the square.
3. **Perimeter of a regular pentagon** $= 5l$ where l = the length of the side of the pentagon and so on.

❖ Area formulas

1. If we denote the length of a square by l , then the area of the square $= l^2$
2. If we denote the length of a rectangle by l and its breadth by b , then the area of the rectangle $= l \times b = lb$.
3. Similarly, if b stands for the base and h for the height of a triangle, then the area of the

$$\text{Triangle} = \frac{b \times h}{2} = \frac{bh}{2}.$$

Once a formula, that is, the algebraic expression for a given quantity is known, the value of the quantity can be computed as required.

For example, for a square of length 3 cm, the perimeter is obtained by putting the value $l = 3$ cm in the expression of the perimeter of a square, i.e., $4l$.

The perimeter of the given square $= (4 \times 3) \text{ cm} = 12 \text{ cm}$.

Similarly, the area of the square is obtained by putting in the value of $l (= 3 \text{ cm})$ in the expression for the area of a square, that is, l^2 ;

Area of the given square = $(3)^2 \text{ cm}^2 = 9 \text{ cm}^2$.

❖ Rules for number patterns


Study the following statements: -

1. If a natural number is denoted by n , its successor is $(n + 1)$. We can check this for any natural number. For example, if $n = 10$, its successor is $n + 1 = 11$, which is known.
2. If a natural number is denoted by n , $2n$ is an even number and $(2n + 1)$ an odd number. Let us check it for any number and $2n + 1 = 2 \times 15 + 1 = 30 + 1 = 31$ is indeed an odd number.

Do This

Take (small) line segments of equal length such as matchsticks, tooth picks or pieces of straws cut into smaller pieces of equal length. Join them in patterns as shown in the figures given:

1. Observe the pattern in Fig 12.1.

It consists of repetitions of the shape  made from 4 line segments. As you see for one shape you need 4 segments, for two shapes 7, for three 10 and so on. If n is the number of shapes, then the number of segments required to form n shapes is given by $(3n + 1)$.

You may verify this by taking $n = 1, 2, 3, 4, \dots, 10, \dots$ etc. For example, if the number of letters formed is 3, then the number of line segments required is $3 \times 3 + 1 = 9 + 1 = 10$, as seen from the figure.

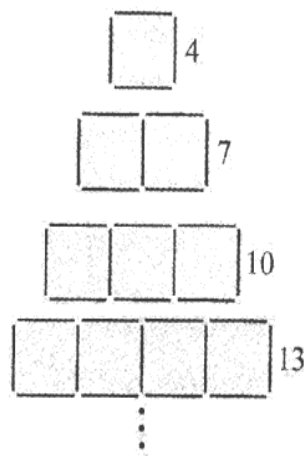




Fig 12.1

2. Now, consider the pattern in Fig 122.

Here the  shape is repeated. The number of segments required to form 1, 2, 3, 4, shapes are 3, 5, 7, 9, ... respectively. If n stands for the shapes formed, the number of segments required is given by the expression $(2n + 1)$. You may check if the expression is correct by taking any value of n , say $n = 4$. Then $(2n + 1) = (2 \times 4) + 1 = 9$, which is indeed the number of line segments required to make 4 s.

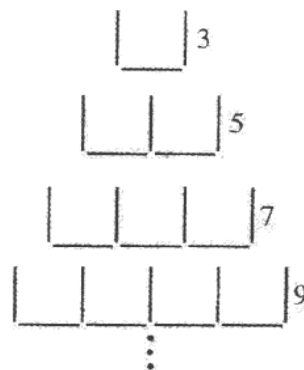


Fig 12.2

❖ Some more number patterns

Let us now look at another pattern of numbers, this time without any drawing to help us

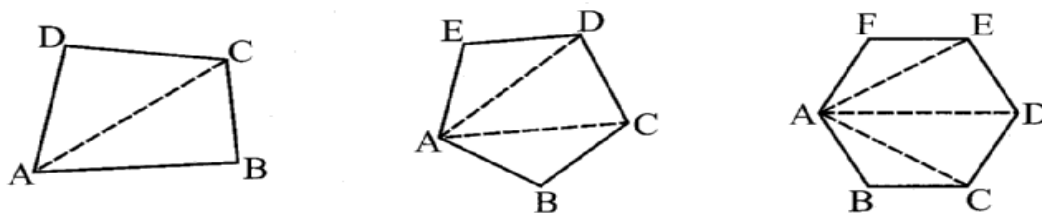
3, 6, 9, 12, ..., $3n$, ...

The numbers are such that they are multiples of 3 arranged in an increasing order, beginning with 3. The term which occurs at n^{th} position is given by the expression $3n$. You can easily find the term which occurs in the 10^{th} position (which is $3 \times 10 = 30$); 100^{th} position (which is $3 \times 100 = 300$) and so on.

❖ Pattern in geometry

What is the number of diagonals we can draw from one vertex of a quadrilateral? Check it, it is one.

From one vertex of a pentagon? Check it, it is 2.

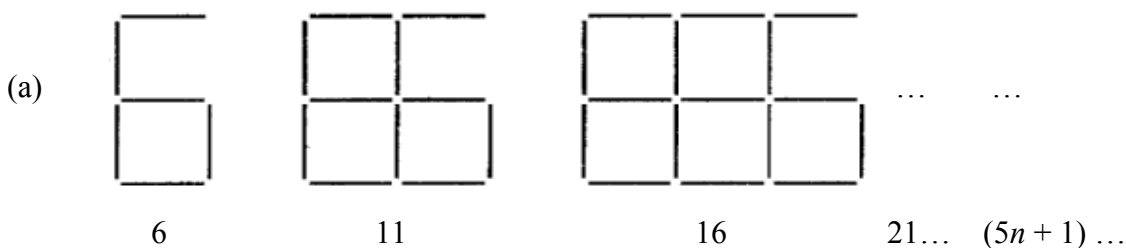


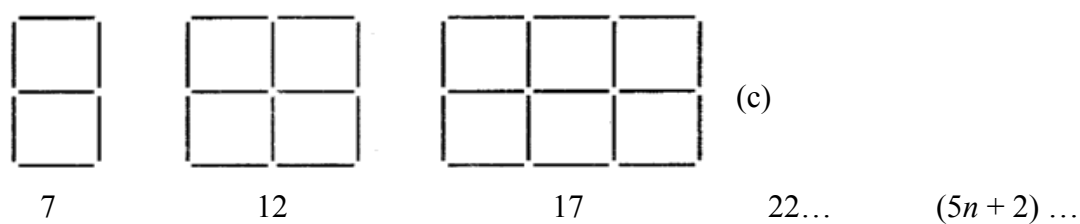
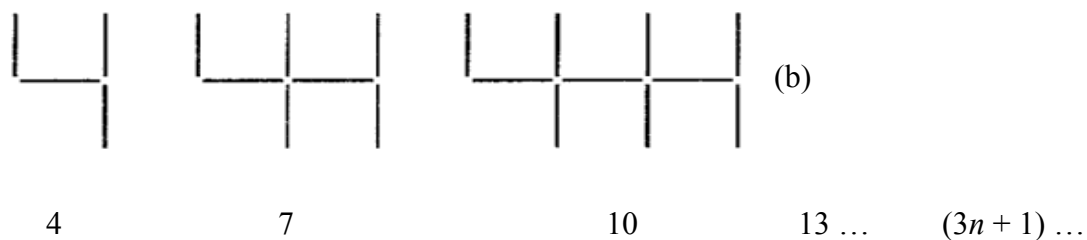
From one vertex of a hexagon? It is 3.

The number of diagonals we can draw from one vertex of a polygon of n sides is $(n - 3)$. Check it for a heptagon (7 sides) and octagon (8 sides) by drawing figures. What is the number for a triangle (3 sides)? Observe that the diagonals drawn from any one vertex divide the polygon in as many non-overlapping triangles as the number of diagonals that can be drawn from the vertex plus one.

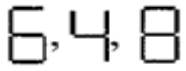
Exercise 12.4

1. Observe the patterns of digits made from line segments of equal length. You will find such segmented digits on the display of electronic watches or calculators.





If the number of digits formed is taken to be n , the number of segments required to form n digits is given by the algebraic expression appearing on the right of each pattern.

How many segments are required to form 5, 10, 100 digits of the kind .

2. Use the given algebraic expression to complete the table of number pattern.

S.No	Expression	Terms									
		1 st	2 nd	3 rd	4 th	5 th	...	10 th	...	100 th	...
(i)	$2n - 1$	1	3	5	7	9	—	19	—	—	—
(ii)	$3n + 2$	2	5	8	11	—	—	—	—	—	—
(iii)	$4n + 1$	5	9	13	17	—	—	—	—	—	—
(iv)	$7n + 20$	27	34	41	48	—	—	—	—	—	—
(v)	$n^2 + 1$	2	5	10	17	—	—	—	—	10.001	—

What Have We Discussed

1. **Algebraic expressions** are formed from **variables** and **constants**. We use the operations of **addition**, **subtraction**, **multiplication** and **division** on the variables and constants to form expressions. For example, the expression $4xy + 7$ is formed from the variables x and y and constants 4 and 7. The constant 4 and the variables x and y are multiplied to give the product $4xy$ and the constant 7 is added to this product to give the expression.
2. Expressions are made up of **terms**. Terms are **added** to make an expression. For example, the addition of the terms $4xy$ and 7 gives the expression $4xy + 7$.
3. A term is a **product of factors**. The term $4xy$ in the expression $4y + 7$ is a product of factors x , y and 4. Factors containing variables are said to be **algebraic factors**.
4. The **coefficient** is the numerical factor in the term. Sometimes anyone factor in a term is called the coefficient of the remaining part of the term.
5. Any expression with one or more terms is called a **polynomial**. Specifically a one term expression is called a monomial; a two-term expression is called a **binomial**; and a three-term expression is called a **trinomial**.
6. Terms which have the same algebraic factors are **like** terms. Terms which have different algebraic factors are **unlike** terms. Thus, terms $4xy$ and $-3xy$ are like terms; but terms $4xy$ and $-3x$ are not like terms.
7. The **sum** (or **difference**) of two like terms is a **like** term with coefficient equal to the **sum** (or **difference**) of the coefficients of the two like terms. Thus, $8xy - 3xy = (8 - 3)xy$, i.e., $5xy$.
8. When we **add** two algebraic expressions, the like terms are added as given above; the **unlike** terms are **left as they are**. Thus, the sum of $4x^2 + 5x$ and $2x + 3$ is $4x^2 + 7x + 3$; the like terms $5x$ and $2x$ add to $7x$; the unlike terms $4x^2$ and 3 are left as they are.
9. In situation such as solving an equation and using a formula, we have to **find the value of an expression**. The value of the expression depends on the value of the variable from which the expression is formed. Thus, the value of $7x - 3$ for $x = 5$ is 32, since $7(5) - 3 = 35 - 3 = 32$.
10. **Rules and formulas** in mathematics are written in a concise and general form using algebraic expressions:
Thus, the area of rectangle = lb , where l is the length and b is the breadth of the rectangle.
The general (n^{th}) term of a number pattern (or a sequence) is an expression in n .
Thus, the n^{th} term of the number pattern 11, 21, 31, 41, ... is $(10n + 1)$