

SUMMATIVE ASSESSMENT : 1 - 2014 - 2015
CLASS : III – MATHEMATICS WORKSHEET

UNIT : 1 – NUMBERS**Fill in the blanks :**

1. The smallest 1 digit number is _____.
2. The largest 1 digit number is _____.
3. The smallest two digit number is _____.
4. The largest two digit number is _____.
5. The smallest three digit number is _____.
6. The largest three digit number is _____.
7. The smallest four digit number is _____.
8. The largest four digit number is _____.
9. 1 Ten = _____ Ones.
10. 1 Hundred = _____ Tens.
11. 10 Hundreds = _____ Thousand.
12. The smallest 5 digit number is _____.
13. A number written in figures is the _____.
14. A number written in words is the _____.
15. The successor of 999 is _____.
16. The predecessor of 7390 is _____.
17. The place value of 5 in 6538 is _____.
18. The place value of zero is _____.
19. The face value of 7 in 6378 is _____.
20. The number just before 2000 is _____.
21. A number that comes just after a given number is called its _____.
22. The successor of a number is _____ greater than the number.
23. A number that comes just before a given number is called its _____.
24. The predecessor of a number is _____ less than the number.
25. The successor of 3999 is _____.
26. The numbers with 2,4,6,8,0 in the ones place is called _____ numbers.
27. The numbers with 1,3,5,7,9 in the ones place are called _____ numbers.
28. Smallest even number is _____.
29. Smallest odd number is _____.
30. Smallest 2 digit even number is _____.
31. Greatest 3-digit odd number is _____.

32. Greatest 3-digit even number is _____.
33. Greatest 2-digit odd number is _____.
34. Greatest 2-digit even number is _____.

Write the numeral for :

a. Four thousand six hundred forty three	
b. Nine thousand seven.	
c. Seven thousand twelve.	
d. One thousand eight hundred nine.	
e. Four hundred fifty seven.	
f. Eight hundred thirty.	
g. Five thousand nine hundred nineteen.	
h. Six thousand eight hundred twenty one.	
i. Two thousand fourteen.	
j. Three thousand seventy five.	

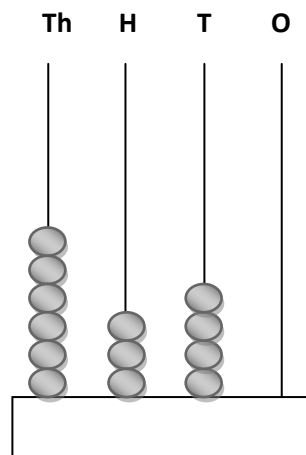
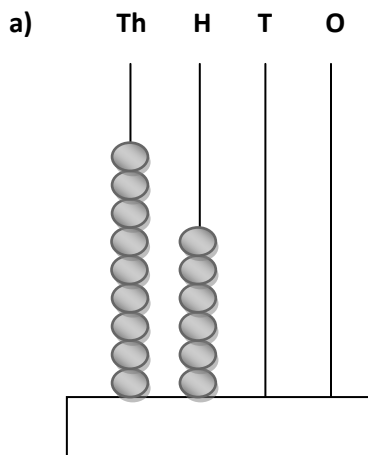
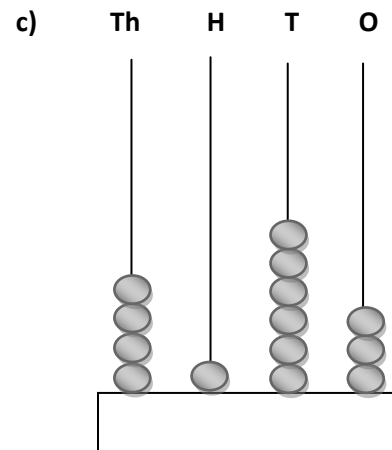
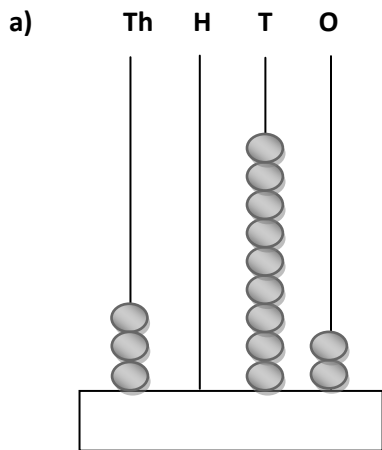
Write the number names :

a. 9067	
b. 6908	
c. 3190	
d. 7206	
e. 4562	

Write the predecessor and successor of the given numbers :

Predecessor		Successor
	5950	
	7000	
	2099	
	3999	
	6210	

Write the numerals and number names :



Fill in the blanks using '<', '>' or '='

7359

6559

2463

2903

4006

6009

5253

5253

3148

3149

8436

7238

8001

8001

1435

1435

Write the numbers according to the pattern given :

1. 5098, 5099, 5100, _____, _____, _____.
2. 4017, 4027, 4037, _____, _____, _____.
3. 1121, 2121, 3121, _____, _____, _____.
4. 2305, 2310, 2315, _____, _____, _____.
5. 6045, 6050, 6055, _____, _____, _____.
6. 5125, 5225, 5325, _____, _____, _____.
7. 4022, 4024, 4026, _____, _____, _____.
8. 6702, 6701, 6700, _____, _____, _____.
9. 7804, 7803, 7802, _____, _____, _____.
10. 3447, 3448, 3449, _____, _____, _____.

Write the place value and face value of the encircled digits :

Number

Face Value

Place Value

3 9 **8** 5

6 1 2 8

7 1 2 **9**

5 0 **4** 6

9 **6** 2 5

1 **1** 2 8

6 **0** 7 5

4 2 **1** 0

Write the standard form :

1. $2000 + 700 + 60 + 3 =$ _____

2. $1000 + 400 + 20 + 5 =$ _____

3. $8000 + 0 + 40 + 2 =$ _____

4. $9000 + 600 + 0 + 7 =$ _____

Write the expanded form :

1. $5629 =$ _____ $+$ _____ $+$ _____ $+$ _____

2. $7120 =$ _____ $+$ _____ $+$ _____ $+$ _____

3. $5008 =$ _____ $+$ _____ $+$ _____ $+$ _____

4. $6125 =$ _____ $+$ _____ $+$ _____ $+$ _____

5. $3467 =$ _____ $+$ _____ $+$ _____ $+$ _____

6. $4813 =$ _____ $+$ _____ $+$ _____ $+$ _____

7. $6859 =$ _____ $+$ _____ $+$ _____ $+$ _____

8. $5010 =$ _____ $+$ _____ $+$ _____ $+$ _____

Write the greatest and smallest 4 – digit number by using the given digits :

Digits

Greatest Number

Smallest Number

a) 9,5,6,4

b) 5,6,8,3

c) 7,9,4,2

d) 6,5,4,3

e) 8,4,6,1

Write the ordinal numbers from 1 to 20.

1.	11.
2.	12.
3.	13.
4.	14.
5.	15.
6.	16.
7.	17.
8.	18.
9.	19.
10.	20.

Circle the largest number :

- | | | | | |
|---------|------|------|------|------|
| a) 7502 | 7052 | 7250 | 7520 | 7025 |
| b) 8731 | 3465 | 4830 | 2695 | 9000 |
| c) 3100 | 3001 | 3101 | 3111 | 3003 |

Circle the smallest number :

- | | | | | |
|---------|------|------|------|------|
| a) 1357 | 1753 | 1573 | 1735 | 1537 |
| b) 8004 | 8400 | 8040 | 8044 | 8404 |
| c) 6778 | 7678 | 7676 | 6767 | 8767 |

Arrange in ascending order :

- a) 1925, 1259, 1952, 1592, 1529

Ans. _____.

- b) 6309, 6903, 6930, 8730, 6300

Ans. _____.

- c) 2015, 2501, 2105, 2510, 2051

Ans. _____.

Arrange in descending order :

- a) 7889, 9877, 7987, 8887, 7989

Ans. _____.

- b) 9082, 8092, 9092, 8082, 9028

Ans. _____.

- c) 1682, 2082, 2080, 1821, 2008

Ans. _____.

UNIT : 2 – ADDITION

Fill in the blanks :

1. The numbers which are added are called _____.
2. The answer of addition is called _____.
3. When we change the order of numbers while adding, the _____ does not change.
4. The sum of zero and any number is the _____.
5. When we add _____ to a number the answer is the number after.
6. $765 + 0 =$ _____.
7. $599 + 1 =$ _____.

8. $32 + 43 = \underline{\hspace{2cm}} + 32$.
9. $15 + 10 = 25$, the addends are , and the sum is .
10. The is always greater than the numbers being added, except when one of the numbers being added is zero.
11. $19 + 20 + 7 = 20 + \underline{\hspace{1cm}} + 19$.

Add the following :

$\begin{array}{r} 39 \\ + 27 \\ \hline \end{array}$	$\begin{array}{r} 608 \\ + 297 \\ \hline \end{array}$	$\begin{array}{r} 8347 \\ + 1780 \\ \hline \end{array}$	$\begin{array}{r} 263 \\ + 423 \\ \hline \end{array}$	$\begin{array}{r} 56 \\ + 9 \\ \hline \end{array}$
$\begin{array}{r} 978 \\ 32 \\ + 9 \\ \hline \end{array}$	$\begin{array}{r} 2399 \\ 1602 \\ + 4178 \\ \hline \end{array}$	$\begin{array}{r} 5468 \\ 302 \\ + 90 \\ \hline \end{array}$	$\begin{array}{r} 1950 \\ 4625 \\ + 169 \\ \hline \end{array}$	

Solve the sums :

$423 + 546$	$960 + 248 + 701$	$79 + 83$
$4269 + 2400 + 3512$	$4569 + 665 + 6543$	$6795 + 238$

$9703 + 129 + 32$	$5463 + 295 + 6309$	$4362 + 78$
$1900 + 78 + 1985$	$2431 + 3455 + 8$	$863 + 29 + 7$

Do the following :

1. A shop sold 6200 bottles of chocolate milk and 3780 strawberry milk in a week. How many bottles were sold in all ?
2. There are 4358 apple trees and 3850 mango trees and 2900 coconut trees on a farm. How many trees are there in all ?
3. In a school library, there are 800 English books, 750 Hindi books and 85 French books. Find the total number of books in the library ?
4. In a school there are 3255 boys and 3640 girls. How many children are there in all ?
5. A fruit seller has 360 apples, 435 mangoes and 295 oranges. How many fruits are there in all ?
6. At a railway station, 3750 tickets were sold on first week and 3875 tickets on second week. How many tickets were sold on both weeks ?
7. Ramu sold 215 ice creams. Raju sold 300 ice creams. Mohan sold 190 ice creams. How many ice creams were sold in all ?
8. At the book fair, 2409 books were sold on the first day and 3508 books on the second day. How many books were sold in all ?
9. The gardener at the rose garden planted 450 red rose saplings, 386 yellow rose saplings and 98 white rose saplings. How many saplings did he plant in all ?