

# CHAPTER 15

## Electromagnetic Induction and Alternating Current

### Section-A

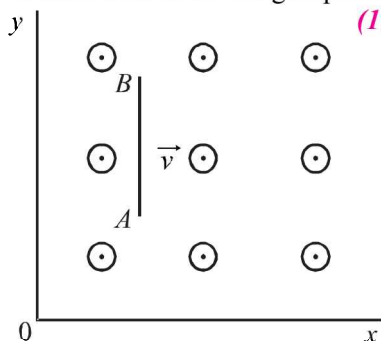
### JEE Advanced/ IIT-JEE

#### A Fill in the Blanks

1. A uniformly wound solenoidal coil of self inductance  $1.8 \times 10^{-4}$  henry and resistance 6 ohm is broken up into two identical coils. These identical coils are then connected in parallel across a 15-volt battery of negligible resistance. The time constant for the current in the circuit is ..... seconds and the steady state current through the battery is ..... amperes. (1989 - 2 Marks)
2. In a straight conducting wire, a constant current is flowing from left to right due to a source of emf. When the source is switched off, the direction of the induced current in the wire will ..... (1993 - 1 Marks)

#### B True/False

1. An e.m.f. can be induced between the two ends of a straight copper wire when it is moved through a uniform magnetic field. (1980)
2. A coil of metal wire is kept stationary in a non-uniform magnetic field. An e.m.f. is induced in the coil. (1986 - 3 Marks)
3. A conducting rod  $AB$  moves parallel to the  $x$ -axis (see Fig.) in a uniform magnetic field pointing in the positive  $z$ -direction. The end  $A$  of the rod gets positively charged. (1987 - 2 Marks)

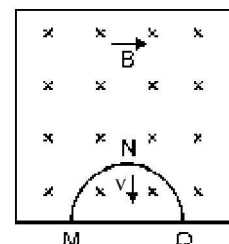


#### C MCQs with One Correct Answer

1. A thin circular ring of area  $A$  is held perpendicular to a uniform magnetic field of induction  $B$ . A small cut is made in the ring and a galvanometer is connected across the ends such that the total resistance of the circuit is  $R$ . When the ring is suddenly squeezed to zero area, the charge flowing through the galvanometer is (1995S)

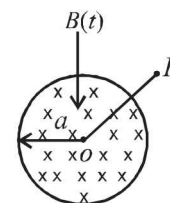
- (a)  $\frac{BR}{A}$  (b)  $\frac{AB}{R}$  (c)  $ABR$  (d)  $\frac{B^2 A}{R^2}$

2. A thin semi-circular conducting ring of radius  $R$  is falling with its plane vertical in horizontal magnetic induction  $\vec{B}$ . At the position  $MNQ$  the speed of the ring is  $v$ , and the potential difference developed across the ring is (1996 - 2 Marks)



3. Two identical circular loops of metal wire are lying on a table without touching each other. Loop-A carries a current which increases with time. In response, the loop-B (1999S - 2 Marks)
4. A coil of inductance 8.4 mH and resistance  $6 \Omega$  is connected to a 12 V battery. The current in the coil is 1.0 A at approximately the time (1999S - 2 Marks)
5. A uniform but time-varying magnetic field  $B(t)$  exists in a circular region of radius  $a$  and is directed into the plane of the paper, as shown. The magnitude of the induced electric field at point P at a distance  $r$  from the centre of the circular region (2000S)

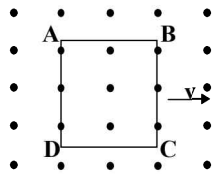
- (a) is zero  
(b) decreases as  $1/r$   
(c) increases as  $r$   
(d) decreases as  $1/r^2$



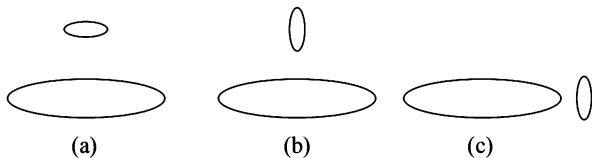
6. A coil of wire having inductance and resistance has a conducting ring placed coaxially within it. The coil is connected to a battery at time  $t = 0$ , so that a time-dependent current  $I_1(t)$  starts flowing through the coil. If  $I_2(t)$  is the current induced in the ring, and  $B(t)$  is the magnetic field at the axis of the coil due to  $I_1(t)$ , then as a function of time ( $t > 0$ ), the product  $I_2(t) B(t)$  (2000S)

- (a) increases with time  
(b) decreases with time  
(c) does not vary with time  
(d) passes through a maximum

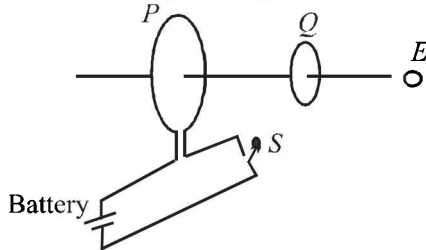
7. A metallic square loop  $ABCD$  is moving in its own plane with velocity  $v$  in a uniform magnetic field perpendicular to its plane as shown in the figure. An electric field is induced (2001S)



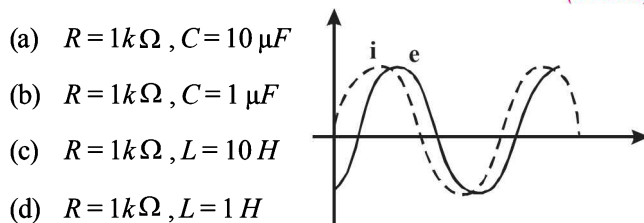
- (a) in  $AD$ , but not in  $BC$  (b) in  $BC$ , but not in  $AD$   
 (c) neither in  $AD$  nor in  $BC$  (d) in both  $AD$  and  $BC$
8. Two circular coils can be arranged in any of the three situations shown in the figure. Their mutual inductance will be (2001S)



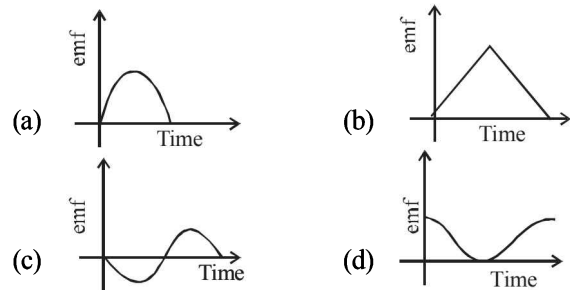
- (a) maximum in situation (a) (b) maximum in situation (b)  
 (c) maximum in situation (c) (d) the same in all situations
9. As shown in the figure,  $P$  and  $Q$  are two coaxial conducting loops separated by some distance. When the switch  $S$  is closed, a clockwise current  $I_P$  flows in  $P$  (as seen by  $E$ ) and an induced current  $I_{Q1}$  flows in  $Q$ . The switch remains closed for a long time. When  $S$  is opened, a current  $I_{Q2}$  flows in  $Q$ . Then the direction  $I_{Q1}$  and  $I_{Q2}$  (as seen by  $E$ ) are (2002S)



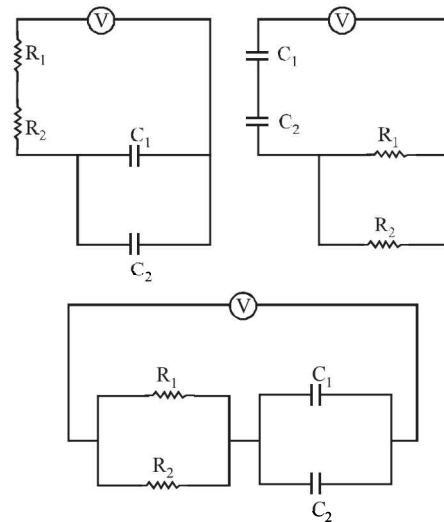
- (a) respectively clockwise and anti-clockwise  
 (b) both clockwise  
 (c) both anti-clockwise  
 (d) respectively anti-clockwise and clockwise
10. A short-circuited coil is placed in a time-varying magnetic field. Electrical power is dissipated due to the current induced in the coil. If the number of turns were to be quadrupled and the wire radius halved, the electrical power dissipated would be (2002S)
- (a) halved (b) the same  
 (c) doubled (d) quadrupled
11. When an  $AC$  source of emf  $e = E_0 \sin(100t)$  is connected across a circuit, the phase difference between the emf  $e$  and the current  $i$  in the circuit is observed to be  $\pi/4$ , as shown in the diagram. If the circuit consists possibly only of  $R$ - $C$  or  $R$ - $L$  or  $L$ - $C$  in series, find the relationship between the two elements (2003S)



12. A small bar magnet is being slowly inserted with constant velocity inside a solenoid as shown in figure. Which graph best represents the relationship between emf induced with time (2004S)



13. An infinitely long cylinder is kept parallel to a uniform magnetic field  $B$  directed along positive  $z$ -axis. The direction of induced current as seen from the  $z$ -axis will be (2005S)
- (a) zero  
 (b) anticlockwise of the  $+ve$   $z$  axis  
 (c) clockwise of the  $+ve$   $z$  axis  
 (d) along the magnetic field
14. Find the time constant (in  $\mu s$ ) for the given  $RC$  circuits in the given order respectively (2006 - 3M, -1)



$$R_1 = 1\Omega, R_2 = 2\Omega, C_1 = 4\mu F, C_2 = 2\mu F$$

- (a)  $18, 4, \frac{8}{9}$  (b)  $18, \frac{8}{9}, 4$  (c)  $4, 18, \frac{8}{9}$  (d)  $4, \frac{8}{9}, 18$
15. The figure shows certain wire segments joined together to form a coplanar loop. The loop is placed in a perpendicular magnetic field in the direction going into the plane of the figure. The magnitude of the field increases with time.  $I_1$  and  $I_2$  are the currents in the segments  $ab$  and  $cd$ . Then, (2009)
- (a)  $I_1 > I_2$   
 (b)  $I_1 < I_2$   
 (c)  $I_1$  is in the direction  $ba$  and  $I_2$  is in the direction  $cd$   
 (d)  $I_1$  is in the direction  $ab$  and  $I_2$  is in the direction  $dc$

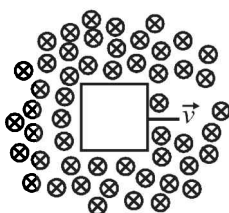
16. An AC voltage source of variable angular frequency  $\omega$  and fixed amplitude  $V_0$  is connected in series with a capacitance  $C$  and an electric bulb of resistance  $R$  (inductance zero). When  $\omega$  is increased (2010)
- the bulb glows dimmer
  - the bulb glows brighter
  - total impedance of the circuit is unchanged
  - total impedance of the circuit increases

### D MCQs with One or More than One Correct

1.  $L$ ,  $C$  and  $R$  represent the physical quantities, inductance, capacitance and resistance respectively. The combination(s) which have the dimensions of frequency are (1984-2 Marks)

(a)  $1/RC$  (b)  $R/L$  (c)  $1/\sqrt{LC}$  (d)  $C/L$

2. A conducting square loop of side  $L$  and resistance  $R$  moves in its plane with a uniform velocity  $v$  perpendicular to one of its sides. A magnetic induction  $B$ , constant in time and space, pointing perpendicular and into the plane of the loop exists everywhere. (1989-2 Marks)



The current induced in the loop is:

(a)  $BLv/R$  clockwise (b)  $BLv/R$  anticlockwise  
(c)  $2BLv/R$  anticlockwise (d) zero.

3. Two different coils have self-inductances  $L_1 = 8$  mH and  $L_2 = 2$  mH. The current in one coil is increased at a constant rate. The current in the second coil is also increased at the same constant rate. At a certain instant of time, the power given to the two coils is the same. At that time, the current, the induced voltage and the energy stored in the first coil are  $i_1$ ,  $V_1$  and  $W_1$  respectively. Corresponding values for the second coil at the same instant are  $i_2$ ,  $V_2$  and  $W_2$  respectively. Then: (1994-2 Marks)

(a)  $\frac{i_1}{i_2} = \frac{1}{4}$  (b)  $\frac{i_1}{i_2} = 4$  (c)  $\frac{W_1}{W_2} = \frac{1}{4}$  (d)  $\frac{V_1}{V_2} = 4$

4. A small square loop of wire of side  $l$  is placed inside a large square loop of wire of side  $L$  ( $L \gg l$ ). The loops are co-planar and their centres coincide. The mutual inductance of the system is proportional to (1998S-2 Marks)

(a)  $l/L$  (b)  $l^2/L$  (c)  $L/l$  (d)  $L^2/l$

5. The SI unit of inductance, the henry, can be written as (1998S-2 Marks)

(a) weber/ampere (b) volt-second/ampere  
(c) joule/(ampere)<sup>2</sup> (d) ohm-second

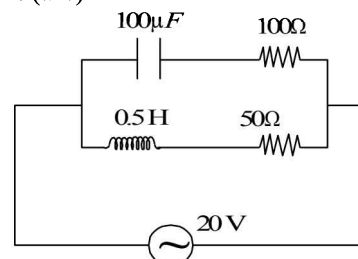
6. A metal rod moves at a constant velocity in a direction perpendicular to its length. A constant, uniform magnetic field exists in space in a direction perpendicular to the rod as well as its velocity. Select the correct statement(s) from the following (1998S-2 Marks)

(a) The entire rod is at the same electric potential.  
(b) There is an electric field in the rod.  
(c) The electric potential is highest at the centre of the rod and decreases towards its ends.  
(d) The electric potential is lowest at the centre of the rod, and increases towards its ends

7. A series R-C circuit is connected to AC voltage source. Consider two cases; (A) when  $C$  is without a dielectric medium and (B) when  $C$  is filled with dielectric of constant 4. The current  $I_R$  through the resistor and voltage  $V_C$  across the capacitor are compared in the two cases. Which of the following is/are true? (2011)

(a)  $I_R^A > I_R^B$  (b)  $I_R^A < I_R^B$   
(c)  $V_C^A > V_C^B$  (d)  $V_C^A < V_C^B$

8. In the given circuit, the AC source has  $\omega = 100$  rad/s. Considering the inductor and capacitor to be ideal, the correct choice(s) is (are) (2012)

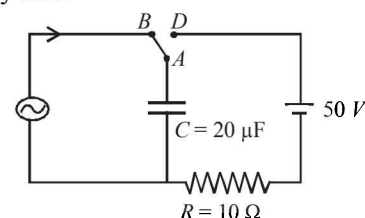


(a) The current through the circuit,  $I$  is 0.3 A.  
(b) The current through the circuit,  $I$  is  $0.3\sqrt{2}$  A  
(c) The voltage across  $100 \Omega$  resistor =  $10\sqrt{2}$  V  
(d) The voltage across  $50 \Omega$  resistor = 10 V

9. A current carrying infinitely long wire is kept along the diameter of a circular wire loop, without touching it, the correct statement(s) is(are) (2012)

(a) The emf induced in the loop is zero if the current is constant.  
(b) The emf induced in the loop is finite if the current is constant.  
(c) The emf induced in the loop is zero if the current decreases at a steady rate.  
(d) The emf induced in the loop is infinite if the current decreases at a steady rate.

10. At time  $t = 0$ , terminal A in the circuit shown in the figure is connected to B by a key and an alternating current  $I(t) = I_0 \cos(\omega t)$ , with  $I_0 = 1$  A and  $\omega = 500$  rad s<sup>-1</sup> starts flowing in it with the initial direction

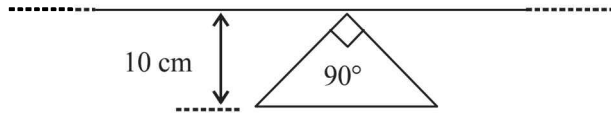


shown in the figure. At  $t = \frac{7\pi}{6\omega}$ , the key is switched from B

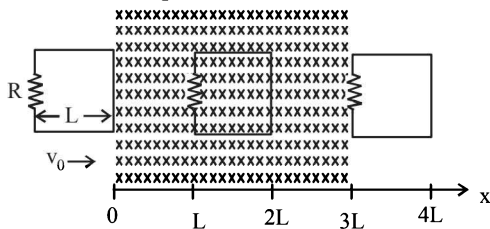
to D. Now onwards only A and D are connected. A total charge  $Q$  flows from the battery to charge the capacitor fully. If  $C = 20 \mu\text{F}$ ,  $R = 10 \Omega$  and the battery is ideal with emf of 50 V, identify the correct statement(s). (JEE Adv. 2014)

(a) Magnitude of the maximum charge on the capacitor before  $t = \frac{7\pi}{6\omega}$  is  $1 \times 10^{-3}$  C  
(b) The current in the left part of the circuit just before  $t = \frac{7\pi}{6\omega}$  is clockwise  
(c) Immediately after A is connected to D, the current in R is 10 A  
(d)  $Q = 2 \times 10^{-3}$  C

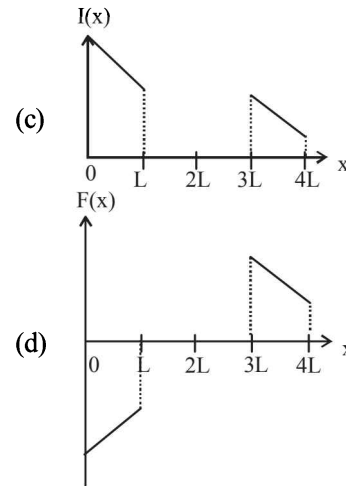
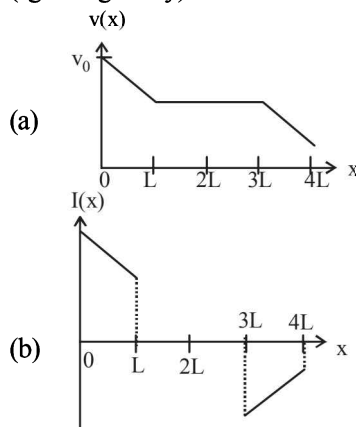
11. A conducting loop in the shape of a right angled isosceles triangle of height 10 cm is kept such that the  $90^\circ$  vertex is very close to an infinitely long conducting wire (see the figure). The wire is electrically insulated from the loop. The hypotenuse of the triangle is parallel to the wire. The current in the triangular loop is in counterclockwise direction and increased at a constant rate of  $10 \text{ A s}^{-1}$ . Which of the following statement(s) is(are) true? (JEE Adv. 2016)



- (a) The magnitude of induced  $\text{emf}$  in the wire is  $\left(\frac{\mu_0}{\pi}\right)$  volt  
 (b) If the loop is rotated at a constant angular speed about the wire, an additional  $\text{emf}$  of  $\left(\frac{\mu_0}{\pi}\right)$  volt is induced in the wire  
 (c) The induced current in the wire is in opposite direction to the current along the hypotenuse  
 (d) There is a repulsive force between the wire and the loop
12. A rigid wire loop of square shape having side of length  $L$  and resistance  $R$  is moving along the  $x$ -axis with a constant velocity  $v_0$  in the plane of the paper. At  $t = 0$ , the right edge of the loop enters a region of length  $3L$  where there is a uniform magnetic field  $B_0$  into the plane of the paper, as shown in the figure. For sufficiently large  $v_0$ , the loop eventually crosses the region. Let  $x$  be the location of the right edge of the loop. Let  $v(x)$ ,  $I(x)$  and  $F(x)$  represent the velocity of the loop, current in the loop, and force on the loop, respectively, as a function of  $x$ . Counter-clockwise current is taken as positive. (JEE Adv. 2016)

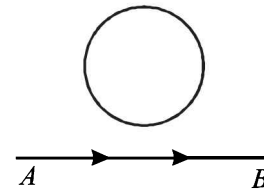


Which of the following schematic plot(s) is (are) correct? (Ignore gravity)

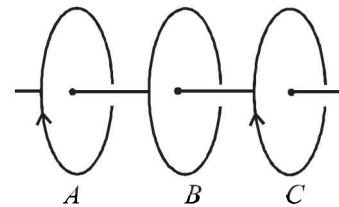


## E Subjective Problems

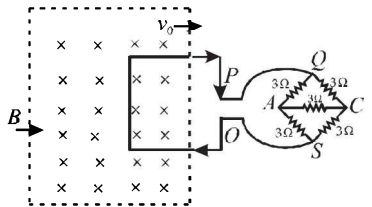
1. A current from  $A$  to  $B$  is increasing in magnitude. What is the direction of induced current, if any, in the loop as shown in the figure? (1979)



2. The two rails of a railway track, insulated from each other and the ground, are connected to a milli voltmeter. What is the reading of the milli voltmeter when a train travels at a speed of  $180 \text{ km/hour}$  along the track, given that the vertical component of earth's magnetic field is  $0.2 \times 10^{-4} \text{ weber/m}^2$  & the rails are separated by 1 meter? (1981- 4 Marks)
3. Three identical closed coils  $A$ ,  $B$  and  $C$  are placed with their planes parallel to one another. Coils  $A$  and  $C$  carry equal currents as shown in Fig. Coils  $B$  and  $C$  are fixed in position and coil  $A$  is moved towards  $B$  with uniform motion. Is there any induced current in  $B$ ? If no, give reasons. If yes mark the direction of the induced current in the diagram. (1982 - 2 Marks)



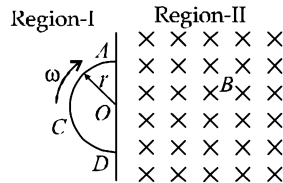
4. A square metal wire loop of side  $10 \text{ cm}$  and resistance  $1 \text{ ohm}$  is moved with a constant velocity  $v_0$  in a uniform magnetic field of induction  $B = 2 \text{ webers/m}^2$  as shown in the figure. The magnetic field lines are perpendicular to the plane of the loop (directed into the paper). The loop is connected to a network of resistors each of value  $3 \text{ ohms}$ . The resistances of the lead wires  $OS$  and  $PQ$  are negligible. What should be the speed of the loop so as to have a steady current of  $1 \text{ milliampere}$  in the loop? Give the direction of current in the loop. (1983 - 6 Marks)





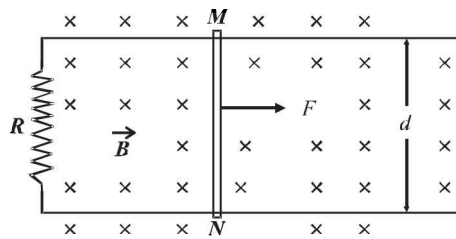
5. Space is divided by the line  $AD$  into two regions. Region I is field free and the Region II has a uniform magnetic field  $B$  directed into the plane of the paper.  $ACD$  is a semicircular conducting loop of radius  $r$  with centre at  $O$ , the plane of the loop being in the plane of the paper. The loop is now made to rotate with a constant angular velocity  $\omega$  about an axis passing through  $O$  and the perpendicular to the plane of the paper. The effective resistance of the loop is  $R$ .

(1985 - 6 Marks)



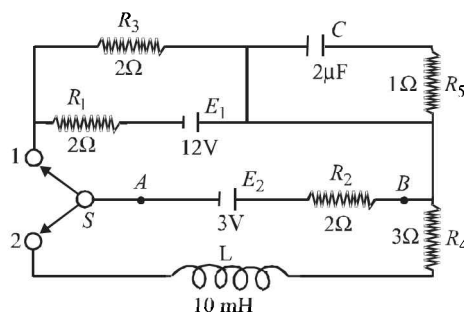
- (i) Obtain an expression for the magnitude of the induced current in the loop.  
 (ii) Show the direction of the current when the loop is entering into the Region II.  
 (iii) Plot a graph between the induced e.m.f and the time of rotation for two periods of rotation.
6. Two long parallel horizontal rails, a distance  $d$  apart and each having a resistance  $\lambda$  per unit length, are joined at one end by a resistance  $R$ . A perfectly conducting rod  $MN$  of mass  $m$  is free to slide along the rails without friction (see figure). There is a uniform magnetic field of induction  $B$  normal to the plane of the paper and directed into the paper. A variable force  $F$  is applied to the rod  $MN$  such that, as the rod moves, a constant current flows through  $R$ .

(1988 - 6 Marks)



- (i) Find the velocity of the rod and the applied force  $F$  as function of the distance  $x$  of the rod from  $R$ .  
 (ii) What fraction of the work done per second by  $F$  is converted into heat?
7. A circuit containing a two position switch  $S$  is shown in fig.

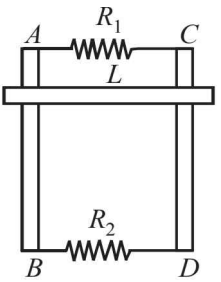
(1991 - 4 + 4 Marks)



- (a) The switch  $S$  is in position '1'. Find the potential difference  $V_A - V_B$  and the rate of production of joule heat in  $R_1$ .  
 (b) If now the switch  $S$  is put in position 2 at  $t = 0$  find  
 (i) steady current in  $R_4$  and  
 (ii) the time when current in  $R_4$  is half the steady value.  
 Also calculate the energy stored in the inductor  $L$  at that time

8. A rectangular frame  $ABCD$ , made of a uniform metal wire, has a straight connection between  $E$  and  $F$  made of the same wire, as shown in Fig.  $AEFD$  is a square of side  $1\text{m}$ , and  $EB = FC = 0.5\text{m}$ . The entire circuit is placed in steadily increasing, uniform magnetic field directed into the plane of the paper and normal to it. The rate of change of the magnetic field is  $1\text{T/s}$ . The resistance per unit length of the wire is  $1\Omega/\text{m}$ . Find the magnitudes and directions of the currents in the segments  $AE$ ,  $BE$  and  $EF$ .

(1993-5 Marks)

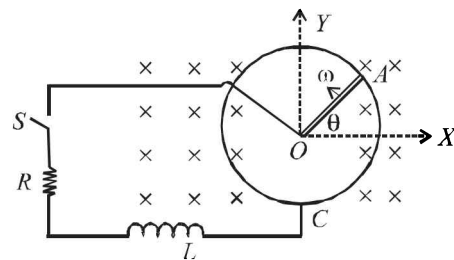


9. Two parallel vertical metallic rails  $AB$  and  $CD$  are separated by  $1\text{m}$ . They are connected at two ends by resistances  $R_1$  and  $R_2$  as shown in Figure. A horizontal metallic bar  $L$  of mass  $0.2\text{kg}$  slides without friction vertically down the rails under the action of gravity. There is a uniform horizontal magnetic field of  $0.6\text{ Tesla}$  perpendicular to the plane of the rails. It is observed that when the terminal velocity is attained, the powers dissipated in  $R_1$  and  $R_2$  are  $0.76\text{ Watt}$  and  $1.2\text{ watt}$  respectively. Find the terminal velocity of the bar  $L$  and the values of  $R_1$  and  $R_2$ .

(1994 - 6 Marks)

10. A metal rod  $OA$  of mass ' $m$ ' and length ' $r$ ' is kept rotating with a constant angular speed  $\omega$  in a vertical plane about a horizontal axis at the end  $O$ . The free end  $A$  is arranged to slide without friction along a fixed conducting circular ring in the same plane as that of rotation. A uniform and constant magnetic induction  $\vec{B}$  is applied perpendicular and into the plane of rotation as shown in the figure below. An inductor  $L$  and an external resistance  $R$  are connected through a switch  $S$  between the point  $O$  and a point  $C$  on the ring to form an electrical circuit. Neglect the resistance of the ring and the rod. Initially, the switch is open.

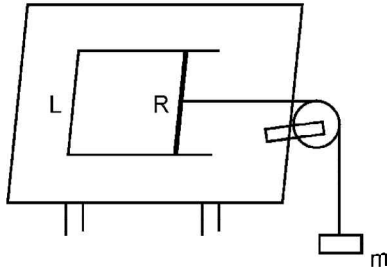
(1995 - 10 Marks)



- (a) What is the induced emf across the terminals of the switch?  
 (b) The switch  $S$  is closed at time  $t = 0$ .  
 (i) Obtain an expression for the current as a function of time.  
 (ii) In the steady state, obtain the time dependence of the torque required to maintain the constant angular speed, given that the rod  $OA$  was along the positive  $X$ -axis at  $t = 0$ .
11. A solenoid has an inductance of  $10\text{ henry}$  and a resistance of  $2\text{ ohm}$ . It is connected to a  $10\text{ volt}$  battery. How long will it take for the magnetic energy to reach  $1/4$  of its maximum value?

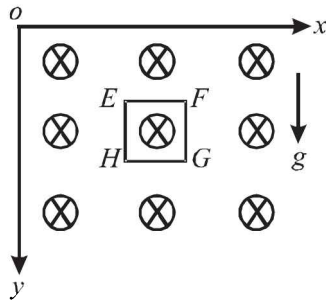
(1996 - 3 Marks)

12. A pair of parallel horizontal conducting rails of negligible resistance shorted at one end is fixed on a table. The distance between the rails is  $L$ . A conducting massless rod of resistance  $R$  can slide on the rails frictionlessly. The rod is tied to a massless string which passes over a pulley fixed to the edge of the table. A mass  $m$ , tied to the other end of the string hangs vertically. A constant magnetic field  $B$  exists perpendicular to the table. If the system is released from rest, calculate.



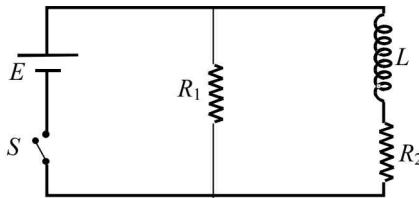
(1997 - 5 Marks)

- (i) the terminal velocity achieved by the rod, and  
(ii) the acceleration of the mass at the instant when the velocity of the rod is half the terminal velocity.
13. A magnetic field  $B = B_0 (y/a) \hat{k}$  is into the paper in the  $+z$  direction.  $B_0$  and  $a$  are positive constants. A square loop  $EFGH$  of side  $a$ , mass  $m$  and resistance  $R$ , in  $x-y$  plane, starts falling under the influence of gravity (see figure). Note the directions of  $x$  and  $y$  axes in figure. (1999 - 10 Marks)

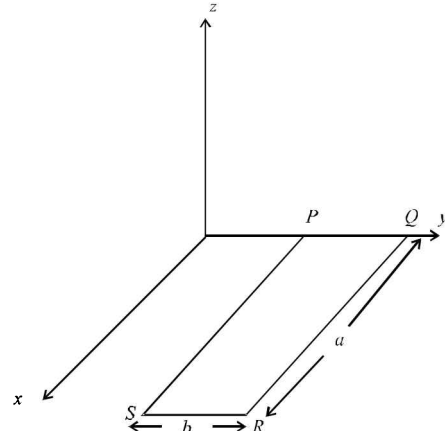


Find

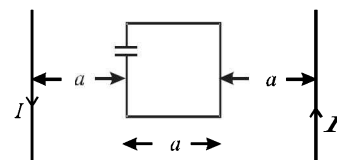
- (a) the induced current in the loop and indicate its direction.  
(b) the total Lorentz force acting on the loop and indicate its direction, and  
(c) an expression for the speed of the loop,  $v(t)$  and its terminal value.
14. An inductor of inductance  $L = 400$  mH and resistors of resistances  $R_1 = 2\Omega$  and  $R_2 = 2\Omega$  are connected to a battery of emf  $E = 12$  V as shown in the figure. The internal resistance of the battery is negligible. The switch  $S$  is closed at time  $t = 0$ . What is the potential drop across  $L$  as a function of time? After the steady state is reached, the switch is opened. What is the direction and the magnitude of current through  $R_1$  as a function of time? (2001-5 Marks)



now released and is found to stay in the horizontal position in equilibrium. (2002 - 5 Marks)

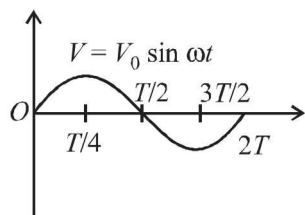


- (a) What is the direction of the current  $I$  in  $PQ$ ?  
(b) Find the magnetic force on the arm  $RS$ .  
(c) Find the expression for  $I$  in terms of  $B_0$ ,  $a$ ,  $b$  and  $m$ .
16. A metal bar  $AB$  can slide on two parallel thick metallic rails separated by a distance  $\ell$ . A resistance  $R$  and an inductance  $L$  are connected to the rails as shown in the figure. A long straight wire carrying a constant current  $I_0$  is placed in the plane of the rails and perpendicular to them as shown. The bar  $AB$  is held at rest at a distance  $x_0$  from the long wire. At  $t = 0$ , it is made to slide on the rails away from the wire. Answer the following questions. (2002 - 5 Marks)
- (a) Find a relation among  $i$ ,  $\frac{di}{dt}$  and  $\frac{d\phi}{dt}$ , where  $i$  is the current in the circuit and  $\phi$  is the flux of the magnetic field due to the long wire through the circuit.  
(b) It is observed that at time  $t = T$ , the metal bar  $AB$  is at a distance of  $2x_0$  from the long wire and the resistance  $R$  carries a current  $i_1$ . Obtain an expression for the net charge that has flown through resistance  $R$  from  $t = 0$  to  $t = T$ .  
(c) The bar is suddenly stopped at time  $T$ . The current through resistance  $R$  is found to be  $\frac{i_1}{4}$  at time  $2T$ . Find the value of  $\frac{L}{R}$  in terms of the other given quantities.
17. A square loop of side ' $a$ ' with a capacitor of capacitance  $C$  is located between two current carrying long parallel wires as shown. The value of  $I$  in the wires is given as  $I = I_0 \sin \omega t$ . (2003 - 4 Marks)

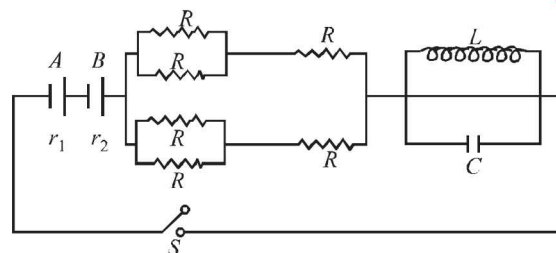


- (a) Calculate maximum current in the square loop.  
(b) Draw a graph between charges on the upper plate of the capacitor vs time.

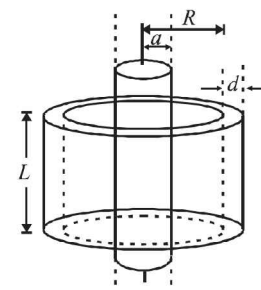
18. In a series  $L$ - $R$  circuit ( $L = 35$  mH and  $R = 11 \Omega$ ), a variable emf source ( $V = V_0 \sin \omega t$ ) of  $V_{rms} = 220$  V and frequency 50 Hz is applied. Find the current amplitude in the circuit and phase of current with respect to voltage. Draw current-time graph on given graph ( $\pi = 22/7$ ). (2004 - 4 Marks)



19. In the figure both cells  $A$  and  $B$  are of equal emf. Find  $R$  for which potential difference across battery  $A$  will be zero, long time after the switch is closed. Internal resistance of batteries  $A$  and  $B$  are  $r_1$  and  $r_2$  respectively ( $r_1 > r_2$ ). (2004 - 4 Marks)



20. A long solenoid of radius  $a$  and number of turns per unit length  $n$  is enclosed by cylindrical shell of radius  $R$ , thickness  $d$  ( $d \ll R$ ) and length  $L$ . A variable current  $i = i_0 \sin \omega t$  flows through the coil. If the resistivity of the material of cylindrical shell is  $\rho$ , find the induced current in the shell.



(2005 - 4 Marks)

## F Match the Following

**DIRECTIONS :** Each question contains statements given in two columns, which have to be matched. The statements in Column-I are labelled A, B, C and D, while the statements in Column-II are labelled p, q, r and s. Any given statement in Column-I can have correct matching with ONE OR MORE statement(s) in Column-II. The appropriate bubbles corresponding to the answers to these questions have to be darkened as illustrated in the following example :

If the correct matches are A-p, s and t; B-q and r; C-p and q; and D-s then the correct darkening of bubbles will look like the given.

	p	q	r	s	t
A	<input checked="" type="radio"/>	<input checked="" type="radio"/>	<input type="radio"/>	<input checked="" type="radio"/>	<input checked="" type="radio"/>
B	<input type="radio"/>	<input checked="" type="radio"/>	<input checked="" type="radio"/>	<input type="radio"/>	<input type="radio"/>
C	<input checked="" type="radio"/>	<input checked="" type="radio"/>	<input type="radio"/>	<input type="radio"/>	<input type="radio"/>
D	<input type="radio"/>	<input type="radio"/>	<input type="radio"/>	<input checked="" type="radio"/>	<input type="radio"/>

1. You are given many resistances, capacitors and inductors. These are connected to a variable DC voltage source (the first two circuits) or an AC voltage source of 50 Hz frequency (the next three circuits) in different ways as shown in **Column II**. When a current  $I$  (steady state for DC or rms for AC) flows through the circuit, the corresponding voltage  $V_1$  and  $V_2$ , (indicated in circuits) are related as shown in **Column I**. Match the two (2010)

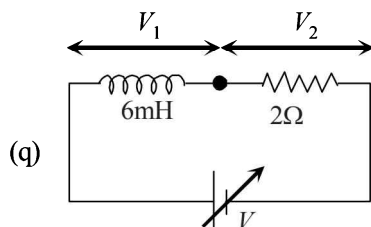
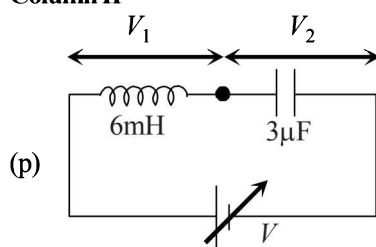
### Column I

(A)  $I \neq 0, V_1$  is

proportional to  $I$

(B)  $I \neq 0, V_2 > V_1$

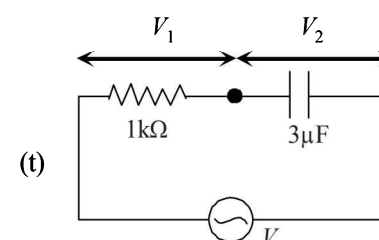
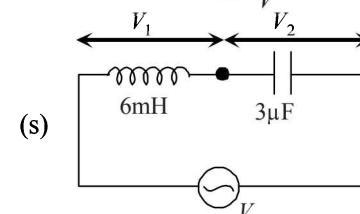
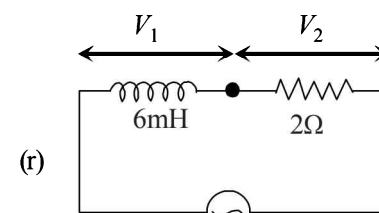
### Column II



(C)  $V_1 = 0, V_2 = V$

proportional to  $I$

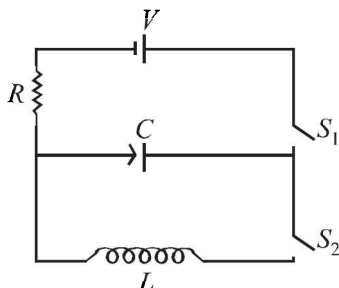
(D)  $I \neq 0, V_2$  is



## G Comprehension Based Questions

### PASSAGE 1

In the given circuit the capacitor ( $C$ ) may be charged through resistance  $R$  by a battery  $V$  by closing switch  $S_1$ . Also when  $S_1$  is opened and  $S_2$  is closed the capacitor is connected in series with inductor ( $L$ ).



1. At the start, the capacitor was uncharged. When switch  $S_1$  is closed and  $S_2$  is kept open, the time constant of this circuit is  $\tau$ . Which of the following is correct

(2006 – 5M, –2)

- after time interval  $\tau$ , charge on the capacitor is  $\frac{CV}{2}$
- after time interval  $2\tau$ , charge on the capacitor of  $CV(1 - e^{-2})$
- the work done by the voltage source will be half of the heat dissipated when the capacitor is fully charged
- after time interval  $2\tau$ , charge on the capacitor is  $CV(1 - e^{-1})$

2. When the capacitor gets charged completely,  $S_1$  is opened and  $S_2$  is closed. Then, (2006 – 5M, –2)

- at  $t = 0$ , energy stored in the circuit is purely in the form of magnetic energy
- at any time  $t > 0$ , current in the circuit is in the same direction
- at  $t > 0$ , there is no exchange of energy between the inductor and capacitor
- at any time  $t > 0$ , instantaneous current in the circuit

may be  $V\sqrt{\frac{C}{L}}$

3. Given that the total charge stored in the  $LC$  circuit is  $Q_0$ , for  $t \geq 0$ , the charge on the capacitor is (2006 – 5M, –2)

- $Q = Q_0 \cos\left(\frac{\pi}{2} + \frac{t}{\sqrt{LC}}\right)$
- $Q = Q_0 \cos\left(\frac{\pi}{2} - \frac{t}{\sqrt{LC}}\right)$
- $Q = -LC \frac{d^2Q}{dt^2}$
- $Q = -\frac{1}{\sqrt{LC}} \frac{d^2Q}{dt^2}$

### PASSAGE 2

A thermal power plant produces electric power of 600 kW at 4000 V, which is to be transported to a place 20 km away from the power plant for consumers' usage. It can be transported either directly with a cable of large current carrying capacity or by using a combination of step-up and step-down transformers at the two ends. The drawback of the direct transmission is the large energy dissipation. In the method using transformers, the dissipation is much smaller. In this method, a step-up transformer is used at the

plant side so that the current is reduced to a smaller value. At the consumers' end, a step-down transformer is used to supply power to the consumers at the specified lower voltage. It is reasonable to assume that the power cable is purely resistive and the transformers are ideal with power factor unity. All the currents and voltages mentioned are rms values. (JEE Adv. 2013)

- If the direct transmission method with a cable of resistance  $0.4 \Omega \text{ km}^{-1}$  is used, the power dissipation (in %) during transmission is  
(a) 20 (b) 30 (c) 40 (d) 50
- In the method using the transformers, assume that the ratio of the number of turns in the primary to that in the secondary in the step-up transformer is 1 : 10. If the power to the consumers has to be supplied at 200 V, the ratio of the number of turns in the primary to that in the secondary in the step-down transformer is  
(a) 200 : 1 (b) 150 : 1 (c) 100 : 1 (d) 50 : 1

### PASSAGE 3

A point charge  $Q$  is moving in a circular orbit of radius  $R$  in the  $x$ - $y$  plane with an angular velocity  $\omega$ . This can be considered as

equivalent to a loop carrying a steady current  $\frac{Q\omega}{2\pi}$ . A uniform magnetic field along the positive  $z$ -axis is now switched on, which increases at a constant rate from 0 to  $B$  in one second. Assume that the radius of the orbit remains constant. The application of the magnetic field induces an emf in the orbit. The induced emf is defined as the work done by an induced electric field in moving a unit positive charge around a closed loop. It is known that, for an orbiting charge, the magnetic dipole moment is proportional to the angular momentum with a proportionality constant  $\gamma$ .

(JEE Adv. 2013)

6. The magnitude of the induced electric field in the orbit at any instant of time during the time interval of the magnetic field change is

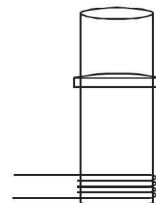
- $\frac{BR}{4}$
- $\frac{BR}{2}$
- $BR$
- $2BR$

7. The change in the magnetic dipole moment associated with the orbit, at the end of the time interval of the magnetic field change, is

- $-\gamma BQR^2$
- $-\gamma \frac{BQR^2}{2}$
- $\gamma \frac{BQR^2}{2}$
- $\gamma BQR^2$

## H Assertion & Reason Type Questions

1. **Statement-1** : A vertical iron rod has coil of wire wound over it at the bottom end. An alternating current flows in the coil. The rod goes through a conducting ring as shown in the figure. The ring can float at a certain height above the coil.



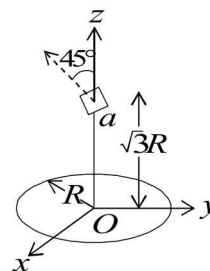
**Statement-2** : In the above situation, a current is induced in the ring which interacts with the horizontal component of the magnetic field to produce an average force in the upward direction. (2007)

- Statement-1 is True, Statement-2 is True; Statement-2 is a correct explanation for Statement-1
- Statement-1 is True, Statement-2 is True; Statement-2 is NOT a correct explanation for Statement-1
- Statement-1 is True, Statement-2 is False
- Statement-1 is False, Statement-2 is True.



## I Integer Value Correct Type

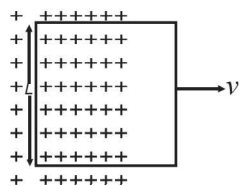
1. A series R-C combination is connected to an AC voltage of angular frequency  $\omega = 500$  radian/s. If the impedance of the R-C circuit is  $R\sqrt{1.25}$ , the time constant (in millisecond) of the circuit is (2011)
2. A circular wire loop of radius  $R$  is placed in the  $x$ - $y$  plane centered at the origin  $O$ . A square loop of side  $a$  ( $a \ll R$ ) having two turns is placed with its centre at  $z = \sqrt{3}R$  along the axis of the circular wire loop, as shown in figure. The plane of the square loop makes an angle of  $45^\circ$  with respect to the  $z$ -axis. If the mutual inductance between the loops is given by  $\frac{\mu_0 a^2}{2^{p/2} R}$ , then the value of  $p$  is (2012)



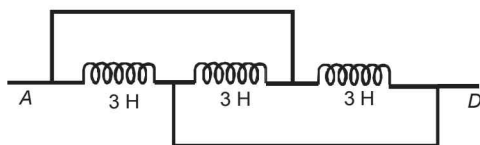
18. Two inductors  $L_1$  (inductance 1 mH, internal resistance 3  $\Omega$ ) and  $L_2$  (inductance 2 mH, internal resistance 4  $\Omega$ ), and a resistor  $R$  (resistance 12  $\Omega$ ) are all connected in parallel across a 5 V battery. The circuit is switched on at time  $t = 0$ . The ratio of the maximum to the minimum current ( $I_{\max} / I_{\min}$ ) drawn from the battery is (JEE Adv. 2016)

## Section-B JEE Main / AIEEE

1. The power factor of an AC circuit having resistance ( $R$ ) and inductance ( $L$ ) connected in series and an angular velocity  $\omega$  is  
(a)  $R/\omega L$  (b)  $R/(R^2 + \omega^2 L^2)^{1/2}$   
(c)  $\omega L/R$  (d)  $R/(R^2 - \omega^2 L^2)^{1/2}$
2. A conducting square loop of side  $L$  and resistance  $R$  moves in its plane with a uniform velocity  $v$  perpendicular to one of its sides. A magnetic induction  $B$  constant in time and space, pointing perpendicular and into the plane at the loop exists everywhere with half the loop outside the field, as shown in figure. The induced emf is [2002]



3. The inductance between A and D is [2002]



- (a) 3.66 H (b) 9 H (c) 0.66 H (d) 1 H.
4. In a transformer, number of turns in the primary coil are 140 and that in the secondary coil are 280. If current in primary coil is 4 A, then that in the secondary coil is [2002]  
(a) 4 A (b) 2 A (c) 6 A (d) 10 A.
5. Two coils are placed close to each other. The mutual inductance of the pair of coils depends upon [2003]  
(a) the rates at which currents are changing in the two coils  
(b) relative position and orientation of the two coils  
(c) the materials of the wires of the coils  
(d) the currents in the two coils
6. When the current changes from +2 A to -2 A in 0.05 second, an e.m.f. of 8 V is induced in a coil. The coefficient of self-induction of the coil is [2003]  
(a) 0.2 H (b) 0.4 H (c) 0.8 H (d) 0.1 H

7. In an oscillating LC circuit the maximum charge on the capacitor is  $Q$ . The charge on the capacitor when the energy is stored equally between the electric and magnetic field is [2003]

- (a)  $\frac{Q}{2}$  (b)  $\frac{Q}{\sqrt{3}}$  (c)  $\frac{Q}{\sqrt{2}}$  (d)  $Q$

8. The core of any transformer is laminated so as to [2003]  
(a) reduce the energy loss due to eddy currents  
(b) make it light weight  
(c) make it robust and strong  
(d) increase the secondary voltage
9. Alternating current can not be measured by D.C. ammeter because [2004]  
(a) Average value of current for complete cycle is zero  
(b) A.C. Changes direction  
(c) A.C. can not pass through D.C. Ammeter  
(d) D.C. Ammeter will get damaged.
10. In an LCR series a.c. circuit, the voltage across each of the components,  $L$ ,  $C$  and  $R$  is 50 V. The voltage across the LC combination will be [2004]

- (a) 100 V (b)  $50\sqrt{2}$  V (c) 50 V (d) 0 V (zero)

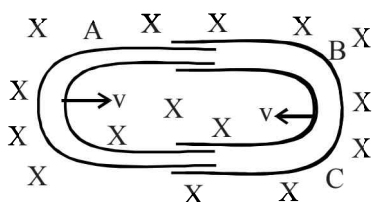
11. A coil having  $n$  turns and resistance  $R\Omega$  is connected with a galvanometer of resistance  $4R\Omega$ . This combination is moved in time  $t$  seconds from a magnetic field  $W_1$  weber to  $W_2$  weber. The induced current in the circuit is [2004]

- (a)  $-\frac{(W_2 - W_1)}{Rnt}$  (b)  $-\frac{n(W_2 - W_1)}{5 Rt}$   
(c)  $-\frac{(W_2 - W_1)}{5 Rnt}$  (d)  $-\frac{n(W_2 - W_1)}{Rt}$

12. In a uniform magnetic field of induction  $B$  a wire in the form of a semicircle of radius  $r$  rotates about the diameter of the circle with an angular frequency  $\omega$ . The axis of rotation is perpendicular to the field. If the total resistance of the circuit is  $R$ , the mean power generated per period of rotation is

- (a)  $\frac{(B\pi r\omega)^2}{2R}$  (b)  $\frac{(B\pi r^2\omega)^2}{8R}$   
(c)  $\frac{B\pi r^2\omega}{2R}$  (d)  $\frac{(B\pi r\omega^2)^2}{8R}$  [2004]

13. In a  $LCR$  circuit capacitance is changed from  $C$  to  $2C$ . For the resonant frequency to remain unchanged, the inductance should be changed from  $L$  to [2004]  
 (a)  $L/2$  (b)  $2L$  (c)  $4L$  (d)  $L/4$
14. A metal conductor of length  $1\text{ m}$  rotates vertically about one of its ends at angular velocity  $5\text{ radians per second}$ . If the horizontal component of earth's magnetic field is  $0.2 \times 10^{-4}\text{ T}$ , then the e.m.f. developed between the two ends of the conductor is [2004]  
 (a)  $5\text{ mV}$  (b)  $50\mu\text{V}$  (c)  $5\mu\text{V}$  (d)  $50\text{ mV}$
15. One conducting  $U$  tube can slide inside another as shown in figure, maintaining electrical contacts between the tubes. The magnetic field  $B$  is perpendicular to the plane of the figure. If each tube moves towards the other at a constant speed  $v$ , then the emf induced in the circuit in terms of  $B$ ,  $l$  and  $v$  where  $l$  is the width of each tube, will be [2005]



- (a)  $-Blv$  (b)  $Blv$   
 (c)  $2Blv$  (d) zero
16. The self inductance of the motor of an electric fan is  $10\text{ H}$ . In order to impart maximum power at  $50\text{ Hz}$ , it should be connected to a capacitance of [2005]  
 (a)  $8\mu\text{F}$  (b)  $4\mu\text{F}$  (c)  $2\mu\text{F}$  (d)  $1\mu\text{F}$
17. The phase difference between the alternating current and emf is  $\frac{\pi}{2}$ . Which of the following cannot be the constituent of the circuit? [2005]  
 (a)  $R, L$  (b)  $C$  alone (c)  $L$  alone (d)  $L, C$
18. A circuit has a resistance of  $12\text{ ohm}$  and an impedance of  $15\text{ ohm}$ . The power factor of the circuit will be [2005]  
 (a)  $0.4$  (b)  $0.8$  (c)  $0.125$  (d)  $1.25$
19. A coil of inductance  $300\text{ mH}$  and resistance  $2\text{ }\Omega$  is connected to a source of voltage  $2\text{ V}$ . The current reaches half of its steady state value in [2005]  
 (a)  $0.1\text{ s}$  (b)  $0.05\text{ s}$  (c)  $0.3\text{ s}$  (d)  $0.15\text{ s}$
20. Which of the following units denotes the dimension  $\frac{ML^2}{Q^2}$ , where  $Q$  denotes the electric charge? [2006]  
 (a)  $\text{Wb/m}^2$  (b) Henry (H)  
 (c)  $\text{H/m}^2$  (d) Weber (Wb)
21. In a series resonant  $LCR$  circuit, the voltage across  $R$  is  $100\text{ volts}$  and  $R = 1\text{ k}\Omega$  with  $C = 2\mu\text{F}$ . The resonant frequency  $\omega$  is  $200\text{ rad/s}$ . At resonance the voltage across  $L$  is [2006]  
 (a)  $2.5 \times 10^{-2}\text{ V}$  (b)  $40\text{ V}$   
 (c)  $250\text{ V}$  (d)  $4 \times 10^{-3}\text{ V}$
22. In an AC generator, a coil with  $N$  turns, all of the same area  $A$  and total resistance  $R$ , rotates with frequency  $\omega$  in a magnetic field  $B$ . The maximum value of emf generated in the coil is [2006]  
 (a)  $N.A.B.R.\omega$  (b)  $N.A.B$   
 (c)  $N.A.B.R.$  (d)  $N.A.B.\omega$

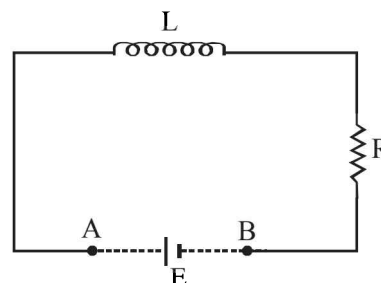
23. The flux linked with a coil at any instant ' $t$ ' is given by

$$\phi = 10t^2 - 50t + 250$$

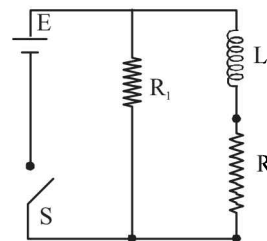
The induced emf at  $t = 3\text{ s}$  is

[2006]

- (a)  $-190\text{ V}$  (b)  $-10\text{ V}$  (c)  $10\text{ V}$  (d)  $190\text{ V}$
24. An inductor ( $L = 100\text{ mH}$ ), a resistor ( $R = 100\text{ }\Omega$ ) and a battery ( $E = 100\text{ V}$ ) are initially connected in series as shown in the figure. After a long time the battery is disconnected after short circuiting the points  $A$  and  $B$ . The current in the circuit  $1\text{ ms}$  after the short circuit is [2006]

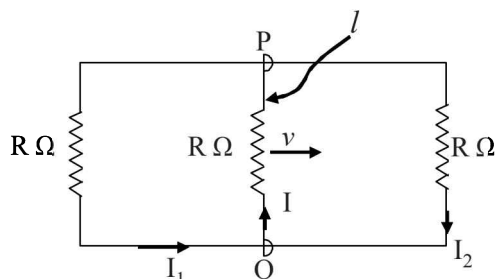


- (a)  $1/e\text{ A}$  (b)  $e\text{ A}$  (c)  $0.1\text{ A}$  (d)  $1\text{ A}$
25. In an a.c. circuit the voltage applied is  $E = E_0 \sin \omega t$ . The resulting current in the circuit is  $I = I_0 \sin \left( \omega t - \frac{\pi}{2} \right)$ . The power consumption in the circuit is given by [2007]  
 (a)  $P = \sqrt{2}E_0I_0$  (b)  $P = \frac{E_0I_0}{\sqrt{2}}$   
 (c)  $P = \text{zero}$  (d)  $P = \frac{E_0I_0}{2}$
26. An ideal coil of  $10\text{ H}$  is connected in series with a resistance of  $5\text{ }\Omega$  and a battery of  $5\text{ V}$ .  $2\text{ second}$  after the connection is made, the current flowing in ampere in the circuit is [2007]  
 (a)  $(1 - e^{-1})$  (b)  $(1 - e)$  (c)  $e$  (d)  $e^{-1}$
27. Two coaxial solenoids are made by winding thin insulated wire over a pipe of cross-sectional area  $A = 10\text{ cm}^2$  and length  $= 20\text{ cm}$ . If one of the solenoid has  $300$  turns and the other  $400$  turns, their mutual inductance is [2008]  
 $(\mu_0 = 4\pi \times 10^{-7}\text{ Tm A}^{-1})$   
 (a)  $2.4\pi \times 10^{-5}\text{ H}$  (b)  $4.8\pi \times 10^{-4}\text{ H}$   
 (c)  $4.8\pi \times 10^{-5}\text{ H}$  (d)  $2.4\pi \times 10^{-4}\text{ H}$
28. An inductor of inductance  $L = 400\text{ mH}$  and resistors of resistance  $R_1 = 2\text{ }\Omega$  and  $R_2 = 2\text{ }\Omega$  are connected to a battery of emf  $12\text{ V}$  as shown in the figure. The internal resistance of the battery is negligible. The switch  $S$  is closed at  $t = 0$ . The potential drop across  $L$  as a function of time is : [2009]

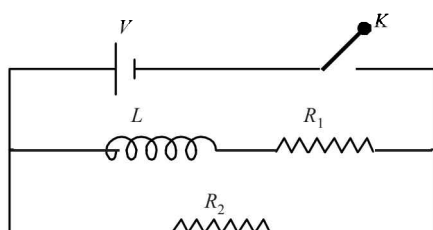


- (a)  $\frac{12}{t}e^{-3t}\text{ V}$  (b)  $6(1 - e^{-t/0.2})\text{ V}$   
 (c)  $12e^{-5t}\text{ V}$  (d)  $6e^{-5t}\text{ V}$

29. A rectangular loop has a sliding connector PQ of length  $l$  and resistance  $R \Omega$  and it is moving with a speed  $v$  as shown. The set-up is placed in a uniform magnetic field going into the plane of the paper. The three currents  $I_1$ ,  $I_2$  and  $I$  are [2010]



- (a)  $I_1 = -I_2 = \frac{Blv}{6R}$ ,  $I = \frac{2Blv}{6R}$   
 (b)  $I_1 = I_2 = \frac{Blv}{3R}$ ,  $I = \frac{2Blv}{3R}$   
 (c)  $I_1 = I_2 = I = \frac{Blv}{R}$   
 (d)  $I_1 = I_2 = \frac{Blv}{6R}$ ,  $I = \frac{Blv}{3R}$
30. In the circuit shown below, the key  $K$  is closed at  $t = 0$ . The current through the battery is [2010]



- (a)  $\frac{VR_1R_2}{\sqrt{R_1^2 + R_2^2}}$  at  $t = 0$  and  $\frac{V}{R_2}$  at  $t = \infty$   
 (b)  $\frac{V}{R_2}$  at  $t = 0$  and  $\frac{V(R_1 + R_2)}{R_1R_2}$  at  $t = \infty$   
 (c)  $\frac{V}{R_2}$  at  $t = 0$  and  $\frac{VR_1R_2}{\sqrt{R_1^2 + R_2^2}}$  at  $t = \infty$   
 (d)  $\frac{V(R_1 + R_2)}{R_1R_2}$  at  $t = 0$  and  $\frac{V}{R_2}$  at  $t = \infty$
31. In a series LCR circuit  $R = 200 \Omega$  and the voltage and the frequency of the main supply is 220V and 50 Hz respectively. On taking out the capacitance from the circuit the current lags behind the voltage by  $30^\circ$ . On taking out the inductor from the circuit the current leads the voltage by  $30^\circ$ . The power dissipated in the LCR circuit is [2010]  
 (a) 305 W (b) 210 W  
 (c) Zero W (d) 242 W
32. A boat is moving due east in a region where the earth's magnetic field is  $5.0 \times 10^{-5} \text{ NA}^{-1} \text{ m}^{-1}$  due north and horizontal. The boat carries a vertical aerial 2 m long. If the speed of the boat is  $1.50 \text{ ms}^{-1}$ , the magnitude of the induced emf in the wire of aerial is: [2011]

- (a) 0.75 mV (b) 0.50 mV  
 (c) 0.15 mV (d) 1 mV

33. A fully charged capacitor  $C$  with initial charge  $q_0$  is connected to a coil of self inductance  $L$  at  $t = 0$ . The time at which the energy is stored equally between the electric and the magnetic fields is: [2011]

- (a)  $\frac{\pi}{4}\sqrt{LC}$  (b)  $2\pi\sqrt{LC}$   
 (c)  $\sqrt{LC}$  (d)  $\pi\sqrt{LC}$

34. A resistor ' $R$ ' and  $2\mu\text{F}$  capacitor in series is connected through a switch to 200 V direct supply. Across the capacitor is a neon bulb that lights up at 120 V. Calculate the value of  $R$  to make the bulb light up 5 s after the switch has been closed. ( $\log_{10} 2.5 = 0.4$ ) [2011]

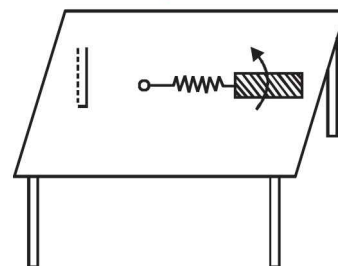
- (a)  $1.7 \times 10^5 \Omega$  (b)  $2.7 \times 10^6 \Omega$   
 (c)  $3.3 \times 10^7 \Omega$  (d)  $1.3 \times 10^4 \Omega$

35. A coil is suspended in a uniform magnetic field, with the plane of the coil parallel to the magnetic lines of force. When a current is passed through the coil it starts oscillating; It is very difficult to stop. But if an aluminium plate is placed near to the coil, it stops. This is due to: [2012]

- (a) development of air current when the plate is placed  
 (b) induction of electrical charge on the plate  
 (c) shielding of magnetic lines of force as aluminium is a paramagnetic material.  
 (d) electromagnetic induction in the aluminium plate giving rise to electromagnetic damping.

36. A metallic rod of length ' $\ell$ ' is tied to a string of length  $2\ell$  and made to rotate with angular speed  $\omega$  on a horizontal table with one end of the string fixed. If there is a vertical magnetic field ' $B$ ' in the region, the e.m.f. induced across the ends of the rod is [JEE Main 2013]

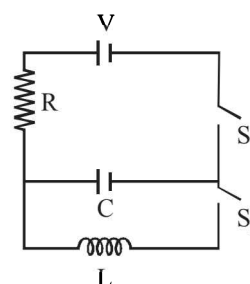
- (a)  $\frac{2B\omega\ell^2}{2}$   
 (b)  $\frac{3B\omega\ell^2}{2}$   
 (c)  $\frac{4B\omega\ell^2}{2}$   
 (d)  $\frac{5B\omega\ell^2}{2}$



37. A circular loop of radius 0.3 cm lies parallel to a much bigger circular loop of radius 20 cm. The centre of the small loop is on the axis of the bigger loop. The distance between their centres is 15 cm. If a current of 2.0 A flows through the smaller loop, then the flux linked with bigger loop is [JEE Main 2013]

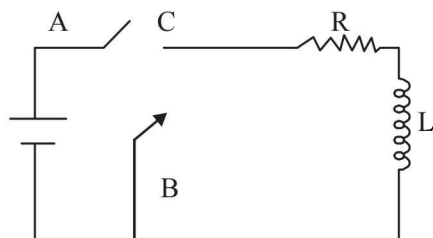
- (a)  $9.1 \times 10^{-11}$  weber (b)  $6 \times 10^{-11}$  weber  
 (c)  $3.3 \times 10^{-11}$  weber (d)  $6.6 \times 10^{-9}$  weber

38. In an LCR circuit as shown below both switches are open initially. Now switch  $S_1$  is closed,  $S_2$  kept open. ( $q$  is charge on the capacitor and  $\tau = RC$  is Capacitive time constant). Which of the following statement is correct? [JEE Main 2013]



- (a) Work done by the battery is half of the energy dissipated in the resistor  
 (b) At  $t = \tau$ ,  $q = CV/2$   
 (c) At  $t = 2\tau$ ,  $q = CV(1 - e^{-2})$   
 (d) At  $t = 2\tau$ ,  $q = CV(1 - e^{-1})$

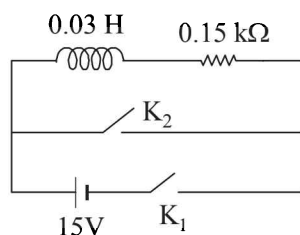
39. In the circuit shown here, the point 'C' is kept connected to point 'A' till the current flowing through the circuit becomes constant. Afterward, suddenly, point 'C' is disconnected from point 'A' and connected to point 'B' at time  $t = 0$ . Ratio of the voltage across resistance and the inductor at  $t = L/R$  will be equal to: [JEE Main 2014]



- (a)  $\frac{e}{1-e}$  (b) 1  
 (c) -1 (d)  $\frac{1-e}{e}$

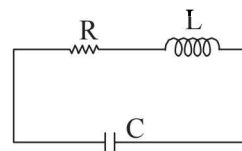
40. An inductor ( $L = 0.03$  H) and a resistor ( $R = 0.15$  k $\Omega$ ) are connected in series to a battery of 15V EMF in a circuit shown below. The key  $K_1$  has been kept closed for a long time. Then at  $t = 0$ ,  $K_1$  is opened and key  $K_2$  is closed simultaneously. At  $t = 1$  ms, the current in the circuit will be : ( $e^5 \cong 150$ )

[JEE Main 2015]

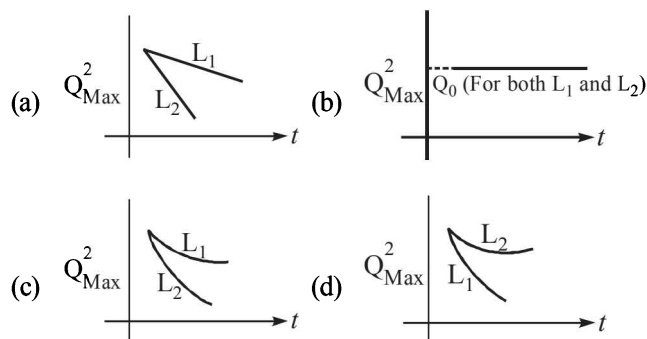


- (a) 6.7 mA (b) 0.67 mA  
 (c) 100 mA (d) 67 mA

41. An LCR circuit is equivalent to a damped pendulum. In an LCR circuit the capacitor is charged to  $Q_0$  and then connected to the L and R as shown below :



If a student plots graphs of the square of maximum charge ( $Q_{\text{Max}}^2$ ) on the capacitor with time( $t$ ) for two different values  $L_1$  and  $L_2$  ( $L_1 > L_2$ ) of L then which of the following represents this graph correctly? (plots are schematic and not drawn to scale) [JEE Main 2015]



42. Two coaxial solenoids of different radius carry current  $I$  in the same direction.  $\vec{F}_1$  be the magnetic force on the inner solenoid due to the outer one and  $\vec{F}_2$  be the magnetic force on the outer solenoid due to the inner one. Then : [JEE Main 2015]

- (a)  $\vec{F}_1$  is radially inwards and  $\vec{F}_2 = 0$   
 (b)  $\vec{F}_1$  is radially outwards and  $\vec{F}_2 = 0$   
 (c)  $\vec{F}_1 = \vec{F}_2 = 0$   
 (d)  $\vec{F}_1$  is radially inwards and  $\vec{F}_2$  is radially outwards

43. An arc lamp requires a direct current of 10 A at 80 V to function. If it is connected to a 220 V (rms), 50 Hz AC supply, the series inductor needed for it to work is close to :

- (a) 0.044 H (b) 0.065 H  
 (c) 80 H (d) 0.08 H